

NAME..... INDEX NO.....

SIGNATURE..... DATE.....

ASUMBI GIRLS HIGH SCHOOL
POST -MOCK 1
AUGUST/SEPTEMBER
2022

AUGUST / SEPTEMBER - 2022

GEOGRAPHY

PAPER 2

TIME: 2³/₄ HRS

INSTRUCTIONS TO CANDIDATES.

- (a) Write your name, class and admission number in the spaces provided above.
- (b) Sign and write the date of the examination in the spaces provided above.
- (c) This paper has **two** sections: **A** and **B**.
- (d) Answer **all** the questions in sections **A**.
- (e) Answer question **6** and any other **two** questions from Section **B**.
- (f) All answers must be written in the answer booklet provided.
- (g) **This paper consists of 5 printed pages.**
- (h) **Candidates should check the question paper to ascertain that all the pages are printed as indicated and that no questions are missing.**
- (i) **Candidates should answer the questions in English.**

For Examiner's Use Only

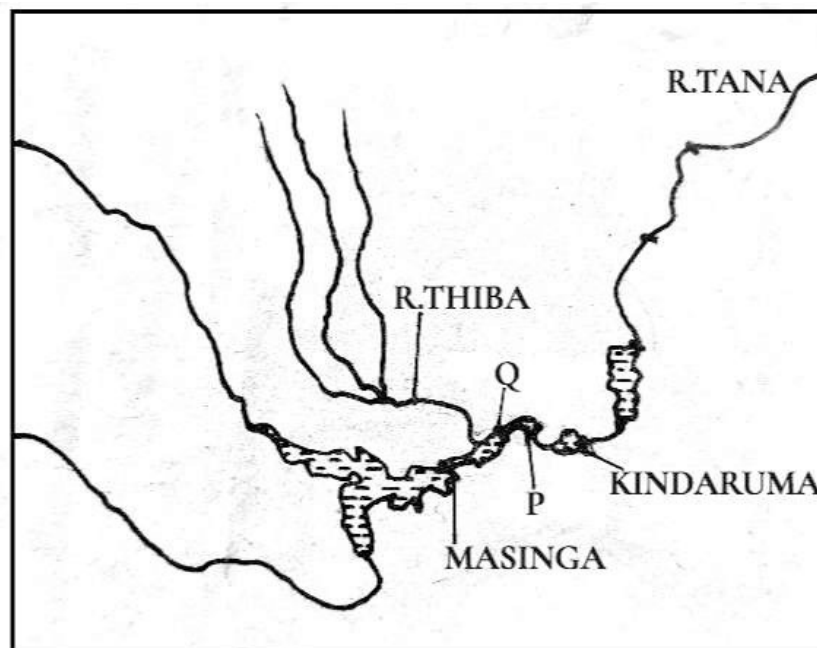
Section	Questions	Maximum Score	Candidate's Score
A	1 – 5	25	

	6	25	
B		25	
		25	
Total Score			

SECTION A

Answer **all** questions in this section

1. (a) Name **two** counties where floriculture is practiced in Kenya. (2 marks)
 (b) State **three** characteristics of horticultural farming in Kenya. (3 marks)
2. (a) Name **two** agricultural food processing industries in Kenya. (2 marks)
 (b) State **three** problems facing Jua – Kali industries in Kenya. (3 marks)
3. (a) The sketch map below shows Hydroelectric Power(H.E.P) along the River Tana. Use it to answer question (a)



- (a) Name the Hydroelectric power (H.E.P) stations marked **P** and **Q**. (2 marks)
- (b) State **three** reasons that limit the use of nuclear energy in Kenya. (3 marks)
4. (a) Give **two** effects of the liberalization of the oil industry in Kenya. (2 marks)
 (b) State **three** problems that have hindered the decentralization of industries in Kenya. (3 marks)
5. (a) Apart from pastoral farming, name **two** other types of commercial livestock farming practiced in Kenya. (2 marks)
 (b) State **three** factors that favour pastoral farming in Kenya. (3 marks)

SECTION B

Answer question 6 and any other two questions from this section.

6. Use the data provided to answer the questions that follow.

Kenya: Value by Foreign Trade between 1999 – 2007 in million Ksh.

YEAR	1999	2000	2001	2002	2003	2004	2005	2006	2007
EXPORTS	985	1,230	1,170	1,080	1,020	1,310	1,450	1,590	1,860
IMPORTS	2,270	2,910	3,195	4,029	4,131	4,247	4,585	4,422	4,516

(a) (i) Draw comparative line graphs to represent the data given. Use a scale of 1 cm to represent 500 million Ksh. on the vertical axis. (7 marks)

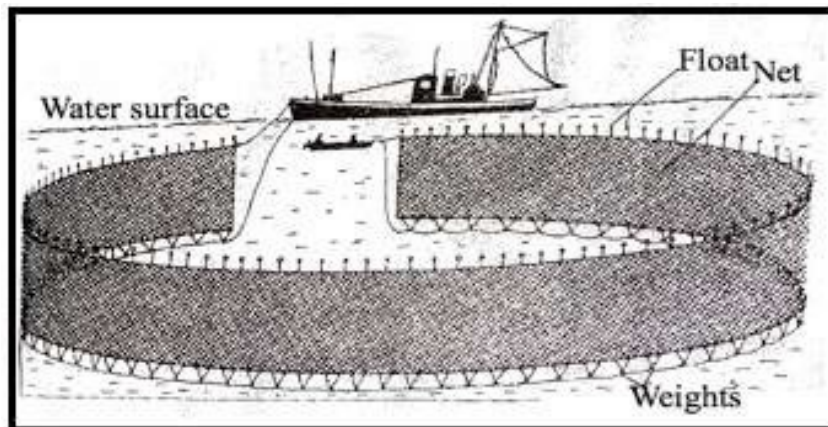
(ii) Describe the trend of value of exports from 1999 to 2007. (3 marks)

(iii) Describe the factors which may have led to the increased export earning from 2004. (6 marks)

(b) Explain why Kenya experiences unfavorable balance of trade. (6 marks)

(c) State **three** ways in which the Kenyan Government is promoting export trade. (3 marks)

7. The diagram below represents a fishing method. Use it to answer question (a) below.



(a) (i) Identify the method of fishing shown below. (1 mark)

(ii) Describe how the above method is used in fishing. (5 marks)

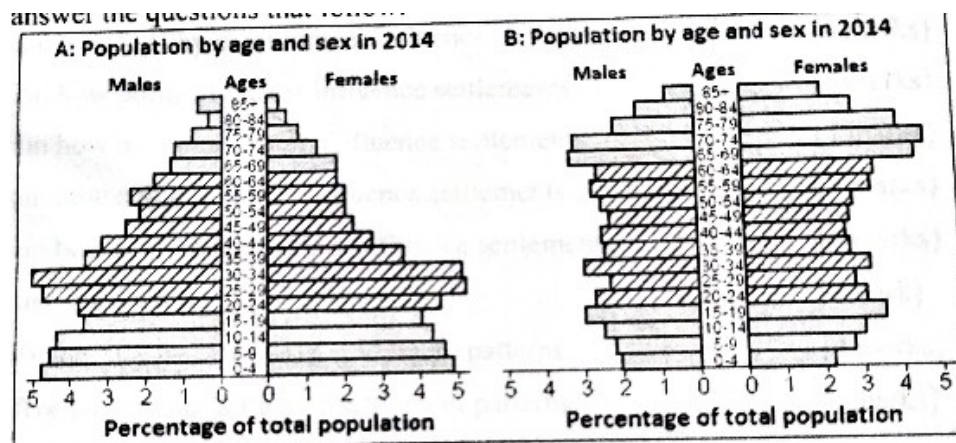
(iii) Give **three** examples of fish species caught by the above method. (3 marks)

(b) Explain **four** factors that favour the fishing industry in Japan. (8 marks)

(c) Explain **four** reasons why East Africa does not export large quantities of fish. (8 marks)

8. (a) Identify **three** kinds of roads used in Africa. (3 marks)
- (b) Name **four** major high ways in Africa. (4 marks)
- (c) (i) Name **four** major world sea routes. (4 marks)
- (ii) Explain **two** factors that make the major sea and ocean routes to be concentrate in the Northern Hemisphere. (4 marks)
- (d) (i) Give **two** forms of written communication. (2 marks)
- (ii) Explain **four** human problems facing transport in Africa. (8 marks)

9. The diagrams below shows the population structures of two countries A and B. Study it and answer the questions that follow.



- (a) Identify the type of graph above. (1 mark)
- (b)(i) Which one belongs to Kenya. (1 mark)
- (ii) Which one belongs to Sweden. (1 mark)
- (c) Describe five characteristics of population structure for country A. (5 marks)
- (d)(i) List two types of internal migration. (2 marks)
- (ii) Give three ways in which government policy causes migration. (3 marks)
- (e) State any four problems resulting from high population growth rate. (4 marks)
- (f) Explain four factors that have contributed to high population growth in Kenya. (8 marks)
10. (a) Identify **two** irrigation schemes in Kenya other than Mwea Tebere. (2 marks)
- (b) Differentiate between land rehabilitation and land reclamation. (2 marks)
- (c) Explain **three** factors that have led to the success of Mwea Tebere Irrigation Scheme. (6 marks)
- (d) State **four** significance of irrigation farming in Kenya. (4 marks)
- (e) Explain **two** methods that are used to rehabilitate land. (4 marks)
- (f) Explain the steps followed in reclaiming land in Netherlands. (7 marks)

