

COMPASS EXAM-22
GRADE 6 TRIAL TWO

2023 ACADEMIC YEAR

FOR MARKING SCHEMES:

ORDER ONLINE AT:

www.kenyaeducators.co.ke

OR

CONTACT:

Mr Machuki – 0724333200

KENYA EDUCATORS CONSULTANCY

KENYA PRIMARY SCHOOL EDUCATION ASSESSMENT



GRADE 6 - 2022

ENGLISH SECTION A: LANGUAGE

Time: 1hr. 40 Mins.

INSTRUCTIONS TO CANDIDATES (Read these instructions carefully)

1. You have been given this question booklet and a separate answer sheet. The question booklet contains **40** questions.
2. Do any necessary rough work in this booklet.
3. When you have chosen your answer mark it on the **ANSWER SHEET**, not in the question paper.

HOW TO USE THE ANSWER SHEET.

4. Use an ordinary pencil only.
5. Make sure that you have written on the answer sheet:-
YOUR ASSESSMENT NUMBER
YOUR NAME
NAME OF YOUR SCHOOL
NAME OF SUBJECT
6. Do not make any marks outside the boxes.
7. Keep your answer sheet as clean as possible and **DO NOT FOLD IT**.
8. For each of the questions 1-40 four answers are given. The answers are lettered A, B, C, D. In each case only **ONE** of the four answers is correct. Choose the correct answer from the choices.
9. On the answer sheet show the correct answer by drawing a **dark line** inside the box in which the letter you have chosen is written.

Example In the Question Booklet

20. Great minds think _____
- A. well
 - B. greatly
 - C. might
 - D. a like

The correct answer is **D**

On the answer sheet:

20. [A] [B] [C] [D] 21. [A] [B] [C] [D] 22. [A] [B] [C] [D] 23. [A] [B] [C] [D]

In the set of boxes number 20, the box with letter **D** printed in it is marked.

10. Your **dark line** **MUST BE** within the box.
11. For each question **ONLY ONE** box is to be marked in each set of four boxes.

This question paper consists of 8 printed pages.

© compasspress, 2022

Study the picture below and answer questions 1-5



1. Which sentence is true about the children in the picture?
 - A. They are making a lot of money.
 - B. They enjoy the work they are doing.
 - C. They are made to do the work that is harmful to them.
 - D. They are playing a key role in building the nation.
2. Who do think has the duty to ensure children are **not** engaged in child labour?
 - A. Prefects and monitors
 - B. The police officers only.
 - C. Political leaders only
 - D. The society at large.
3. Which one of the following is **not** a form of child labour?
 - A. Working with classmates to prepare a farm for a group project.
 - B. Taking care of your siblings at home during a school day.
 - C. Picking tea on a neighbour's farm.
 - D. Working alongside parents to make bricks while siblings are in school.
4. Mr Wambua has a very large coffee farm. He often employs children to pick coffee on his farm. If you were the area Chief, what would be the best thing to do?
 - A. Remind Mr Wambua to treat his workers well.
 - B. Force Mr Wambua to offer good wages to the children.
 - C. Ask Mr Wambua to ensure each child feels comfortable at the place of work.
 - D. Explain to Mr Wambua that it is illegal to employ children.
5. Why do some people employ primary children to do work that is **not** suitable for them?
 - A. They want to keep the children occupied.
 - B. It is a way of showing children how to be responsible.
 - C. They know children are easy to mistreat and exploit.
 - D. They do not know the rights of children.

Choose the best alternative to fill in the blanks.

The day we had been waiting for with great 6 had eventually arrived. That day, our school held cultural day. This was a special event as it gave us a chance to learn about and appreciate 7 traditional cultures in the country. Every class was to present dances and prepare meals 8 a particular Kenyan community. Parents and other guests 9 invited to the event. Everyone enjoyed 10 exciting dances as well as eating different delicacies.

6. A. excited B. exciting C. excitement D. excitement
7. A. each B. different C. another D. other
8. A. for B. in C. to D. from
9. A. will be B. was C. were D. has been
10. A. watching B. seeing C. checking D. cheering

Read the passage below and answer the questions 11 to 17.

Gardening is a good and enjoyable pastime. A garden is a piece of ground adjoining a house where various trees, flowers, fruits, vegetables and so on are grounded. Each garden is surrounded by a fence. Domestic animals as well as pests are not meant to interfere with the garden. Usually, fences are made of wood or bamboo. The green fence is raised around the garden sometimes. The garden is split into various parts to accommodate flowers, crops, fruit trees and vegetables. There are many types of gardens, however, fruit and vegetable gardens are more popular with both urban and rural dwellers. Some of institutions of learning also have their own gardens mostly to help learners with agricultural projects.

Skilled gardeners grow different kinds of vegetables during different seasons. There are vegetables that give good yields during rainy seasons. On the other hand, some vegetables grow a lot better in dry seasons. Gardeners require such information to get the best out of their gardens. Different species of flowers require certain climatic conditions to grow well. Fruit trees are meant to last long hence can be grown anytime although they definitely grow faster when the ground is wet. As for areas that do not receive much rainfall throughout the year, it is advisable to practise irrigation. Drought should not be an excuse of failing to practise gardening. In fact, one may not even need a big space to start a garden. It is not uncommon to see gardeners piling soil in sacks, pots or boxes and using them to grow vegetables. This practice is more common in urban areas.

It is important to keep the garden neat and tidy by attending to it several times a week. Pick up any unwanted litter and dump it in the bin. Plastics and paper bags should not be left in the garden. Dry leaves and grass do not have to be burnt. They should be left to rot and improve the fertility of soil. The use of manure can also be of great significance to the garden. Do not be tempted to use commercial fertilizers. They are harmful to the soil and pollute the environment. Weeding and mulching are also highly recommended for the well-being of the garden. Keep the garden as beautiful as possible. Let it be attractive to encourage other people to start the practice.

11. Why is it important to fence a garden?
- A. To make the crops grow fast.
 - B. To keep off animals.
 - C. To make it easier to tend to it.
 - D. To ensure the crops are not affected by anything at all.
12. Which kinds of crops **cannot** be grown in the garden?
- A. Cash crops
 - B. Vegetables
 - C. Fruits
 - D. Food crops
13. According to the first paragraph, it is right to conclude that many people
- A. do not know how important gardens are.
 - B. prefer like growing fruits and vegetables in their gardens.
 - C. like starting big gardens.
 - D. do not like working in the garden.
14. Why do schools have gardens?
- A. To keep the workers busy.
 - B. To ensure children eat fresh fruits and vegetables.
 - C. It is a source of income for the school.
 - D. To help learners do projects related to farming.
15. What does the writer say about the growing of vegetables?
- A. All vegetables grow under similar conditions.
 - B. Most vegetables are not easy to grow.
 - C. Some vegetables do well in dry seasons.
 - D. All vegetables grow well when it is rainy.
16. Drought has been mentioned in the passage
- A. as the main hindrance to gardening.
 - B. as a problem affecting all farmers worldwide.
 - C. to refer to a long period of time without rainfall
 - D. as the best excuse to avoid gardening.
17. What should a gardener do with the dry leaves?
- A. Leave them in the garden.
 - B. Burn them.
 - C. Take them out of the garden.
 - D. Treat them as weeds.

Read the passage below and answer questions 18 to 25.

Every year Lamu comes to life during the Lamu Cultural Festival, as Kenyans come together to celebrate the past, future, the beliefs and traditions that are greatly cherished by the coastal communities. Lamu is an **ancient** Swahili town and the festival offers locals and tourists an opportunity to have a glimpse of how life in the enchanting town used to be in the past. The event is held in November every year and interested people (locals, domestic and international tourists) are welcome. The event is usually characterized by a lot of exciting activities including donkey races, henna painting, traditional Swahili poetry, dhow sailing, traditional Swahili weddings and a chance to sample delicious Swahili dishes and take part in the 'Bao' game.

This annual event gives people a chance to experience the traditional beliefs of the Lamu people. It also gives them a chance to learn more about the simple and peaceful lifestyle of the Swahili people. During the festival, the locals get a huge economic boost. They sell their artefacts and special foods to tourists. Hotels and restaurants are fully packed because tourists come from far and wide to attend the event. The local businessmen and women have a busy time during the festival. Of course, they get good returns. The government also gets increased revenue due to the booming business.

18. Lamu Festival is mainly held to
- A. entertain the locals
 - B. promote peace among Kenyan communities
 - C. celebrate Swahili culture and traditions
 - D. ensure the locals get a chance to compete
19. How often is Lamu Festival held?
- A. Every other year
 - B. Yearly
 - C. Monthly
 - D. Once in a while
20. The word **ancient** has been used in the passage. Its opposite is
- A. traditional
 - B. fashionable
 - C. significant
 - D. modern
21. Who among the following people act as the host during Lamu Festival?
- A. The locals
 - B. Domestic tourists
 - C. Foreigners
 - D. The government

22. According to the passage, the Swahili dishes are described as
- A. spicy
 - B. foreign
 - C. tasty
 - D. plain
23. Which one of the following activities does **not** take place during the Lamu Festival according to the passage?
- A. Cultural exchange
 - B. Poetry
 - C. Donkey races
 - D. Wrestling
24. Why do you think Lamu town gets an economic boost during the Lamu Festival?
- A. The government supports it.
 - B. Many tourists visit the town and spend plenty of money.
 - C. The hosts have plenty of money to spend.
 - D. There are many things to be bought.
25. Who among the following people introduces guests and runs the programme during the Lamu Festivals?
- A. The adjudicator
 - B. Master of ceremonies
 - C. Ambassadors
 - D. The DJ

In questions 26 to 40, supply the correct answers according to the instructions given.

Fill in the blanks with the correct word.

26. There is _____ food for everyone to eat to their fill.
- A. some
 - B. enough
 - C. a lot
 - D. each
27. _____ learner who took part in the event got a certificate of participation.
- A. All
 - B. Some
 - C. A lot of
 - D. Each

28. I may not join you for the match today. I have _____ chores to do.
- A. a few
 - B. a little
 - C. few
 - D. little
29. The audience remained as silent as the _____ as they waited for the play to begin.
- A. church mouse
 - B. bat
 - C. grave
 - D. the sky
30. It is not right for anyone to _____ the rights of children.
- A. promote
 - B. violate
 - C. check
 - D. learn

Choose the alternative that means the same as the underlined word (s)

31. We are not sure whether or not the cultural day has been **put off** to a later date.
- A. changed
 - B. cancelled
 - C. transferred
 - D. postponed
32. The children were filled with **fatigue** after doing the day's work.
- A. fear
 - B. hunger
 - C. exhaustion
 - D. worry
33. The community holds cultural day **annually**.
- A. yearly
 - B. weekly
 - C. monthly
 - D. fortnightly

Identify the abstract nouns in the sentences given.

34. There was a celebration as the winning team went to the podium to receive their trophy.
A. team
B. podium
C. celebration
D. trophy
35. We were overcome with happiness when the guest of honour offered us a trip to the museum.
A. museum
B. guest
C. overcome
D. happiness
36. Some children are forced to seek jobs in factories due to poverty in their families.
A. children
B. poverty
C. seek
D. families

Complete the proverbs correctly.

37. Every cloud has a silver _____
A. case
B. base
C. lining
D. body
38. All that glitters is not _____
A. gold
B. good
C. silver
D. expensive

Choose the correctly spelt word.

39. A. occassion
B. adjudicator
C. immediatly
D. suprised
40. A. recieve
B. perform.
C. burrial.
D. calendar

KENYA PRIMARY SCHOOL EDUCATION ASSESSMENT



GREDI YA SITA - 2022

KISWAHILI SEHEMU YA KWANZA: LUGHA

Muda: Saa 1 Dakika 40

MAAGIZO KWAMTAHINIWA (Soma kwa makini maagizo yafuatayo)

1. Umepewa kijitabu hiki cha maswali na karatasi ya kujibu. Kijitabu hiki kina maswali 40.
2. Ukisha chagua jibu lionyeshe katika **KARATASI YA MAJIBU** na wala sio katika kijitabu cha maswali.
JINSI YA KUTUMIA KARATASI YA MAJIBU
3. Tumia penseli ya kawaida.
4. Hakikisha ya kwamba yafuatayo yameandikwa katika karatasi ya majibu: -
NAMBARI YAKO YA MTAHANI
JINA LAKO
JINA LA SHULE YAKO
5. Kwa kuchora kistari katika visanduku vyenye nambari zinazokuhusu, onyesha namba yako kamili ya mtahani (yaani nambari ya shule. Na zile namba tatu za mtahaniwa) katika sehemu iliyotengwa mwanzo wa karatasi ya majibu.
6. Usitie alama zozote nje ya visanduku.
7. Iweke safi karatasi yako ya majibu
8. Kwa kila swali 1-40 umepewa majibu manne. Majibu hayo yameonyeshwa kwa herufi A, B, C, D. Ni jibu **MOJA** tu kati ya hayo manne ambayo ni sahihi. Chagua jibu hilo
9. Kwenye karatasi ya majibu, jibu sahihi lionyeshe kwa kuchora kistari katika kisanduku chenye herufi uliyochagua kuwa ndilo jibu.

Mfano:

Katika kijitabu cha maswali:

Kutoka swali 16 - 30 chagua jibu sahihi.

17. Kamilisha methali ifuatayo;
Ukali wa moto ni _____
A. kukuchoma
B. kuunguza
C. kuuchochea
D. kuteketeza
Jibu sahihi ni C.
Katika karatasi ya majibu

16. [A] [B] [C] [D] 17. [A] [B] [C] [D] 18. [A] [B] [C] [D] 19. [A] [B] [C] [D]

Katika visanduku vinavyoonyesha majibu ya swali namba 17, kisanduku chenye herufi C ndicho kilichochoywa kistari.

10. Chora kistari chako vizuri. Kistari chako cheusi na kisijitokeze nje ya kisanduku.
11. Kwa kila swali, chora kistari katika kisanduku kimoja tu kati ya visanduku vinne ulivyopewa.

Kijitabu hiki kina kurasa 8 zilizopigwa chapa.

© compasspress, 2022

Nyumbani



1. Kabla ya nyanya kuingia kwenye nyumba atafanya nini?
A. Asukume mlango na kuingia
B. Abishe mlango kwa kusema “hodi”
C. Asimame mlangoni akingoja afunguliwe
D. Kuwaita watoto “wajukuu wangu”
2. Baada ya nyanya kufanya kinachofaa, watoto wanafaa kujibu
A. Ingia! B. Karibia C. Karibu!
D. Karibiana
3. Nyanya anapoingia, mtoto mmoja atasimama halafu ampatie kiti huku wakimwambia “karibu!”
nyanya atachukua kiti huku akisema “_____”
A. starehe B. ahsante C. nimeshaketi D. shukrani
4. Watoto wale watamwambia bibi wakisema, “_____ nyanya!”
A. marahaba B. habari yako C. hujambo D. shikamoo
5. Naye bibi atajibu kwa kusema _____
A. mzuri B. sijambo C. marahaba D. shikamoo

Soma kifungu kifuatacho kwa makini kisha ujibu maswali 6-9

Siku hiyo niliamka asubuhi na mapema. Usiku uliotangulia haukuwa mfupi. Sikulala hata lepe la usingizi. Nilikuwa nikitazamia kwenda ziara ambayo nilikuwa nimeahidiwa na baba. Nilitoka kitandani jogoo wa kwanza alipowika. Nilielekea kwenye dirisha na nikaifungua pazia. Pale nje palikuwa na giza kiasi. Nilishangaa ni kwa nini bado kulikuwa na giza. Nilirudi kitandani nikaketi. Nilikuwa ninasinzia.

Punde si punde, nilisikia mbisho mlangoni. Halafu sauti nyororo ya mama ikafuatia, “Rogers, hujaamka? Unataka kuchelewa?” Niliamka na nikaruka hadi mlangoni huku nikisema. “Nimeamka mama” Mama aliposikia kuwa nilikuwa macho alirudi. Aliingia jikoni akaanza kuandaa kiamshakinywa. Wakati huu mwanga ulikuwa umeonekana.

Bila kupoteza muda niliingia bafuni na kuoga. Maji yenyewe yalikuwa shadidi. Sikujali kwa kuwa nilikuwa na hamu kuu ya kuzulu mbuga ya wanyama ya Maasai Mara. Nilipomaliza niliingia nyumbani na kuvalia nguo zangu zilizomeremeta kama nyota. Niliondoka nikatembea kwa madaha kwelekea sebuleni. Mezani palikuwa na chupa ya chai na sinia ya maandazi. Nilimeza mate na nikaketi.

6. Msimulizi wa kisa hiki anaitwa nani?
- A. Nyanya B. Mama C. Rogers D. Mwanafunzi
7. Anayesimulia aliamka
- A. akiwa amechelewa B. alfajiri na mapema C. macheo D. mchana
8. Unafikiri ni kwa nini bado kulikuwa na giza?
- A. Ilikuwa ni asubuhi sana B. Msimulizi aliamka usiku
- C. Mama hakuwa amekuja kumwamsha D. Jua lilichelewa kuwaka siku hiyo
9. Ni kwa nini msimulizi alioga kwa maji baridi?
- A. Alikuwa amezoea kutumia maji baridi
- B. Alikuwa na hamu ya safari na hakutaka kupoteza nafasi
- C. Mama alikuwa amemwonya asichelewe
- D. Alitaka kunywa chai kwa maandazi

Soma barua ifuatayo kisha ujibu maswali 10-13

SHULE YA MSINGI YA BORA,
SANDUKU LA POSTA 601,
NYAMIRA.
09-05-2022

Kwa rafiki mpendwa Diana,

Pokea salamu nyingi kama mchanga wa baharini. Unaendeleaje na masomo yako? Gredi ya sita ulipoingia ni pema? Je, unepata marafiki wapya ama bado u kuku mgeni ambaye hakosi kamba mguuni? Ninatarajia kuwa unaendelea vyema. Nasi hapa Nyirama hatuna neno na tunamshukuru Mungu.

Madhumuni ya kukuandikia barua hii ni kukualika katika sherehe za siku yangu ya kuzaliwa. Sherehe itakuwa tarehe kumi na tano mwezi huu kuanzia saa tatu asubuhi. Ninakuomba uje na marafiki wako wawili, msichana na mvulana. Hakikisha kwamba mmefika kwa wakati unaofaa. Msichelewe. Mkumbuke pia kubebea nguo za kuogelea na mavazi ya kuchezea.

Siku hiyo itakuwa ni siku ya furaha mpwitompwito. Tunatarajia wageni wapatao arubaini. Watoto watakuwa ishirini nao marafiki wa wazazi wangu watakuwa idadi hiyo hiyo. Kutakuwa na chakula kochokocho, vinywaji kemkem kama sharubati na pia keki kubwa. Ningependa kukufahamisha kwamba siku hiyo mje na matumbo matupu! Baada ya mlo tutacheza uwanjani na baadaye tutaenda kuogelea. Ninashauri mwaombe wazazi wenu nafasi kabla ya kuja.

Kwaheri ya kuonana. Wasalimie wote wanaonijua.

Ni mimi rafiki yako mpendwa,

John.

10. Barua uliyoisoma ni ya aina gani? Barua
- A. ya kigeni B. ya kirafiki C. ya kindugu D. rasmi
11. Taja neno lingine ambalo linaweza kutumiwa katika nafasi ya neno **barua** lililopigiwa mstari.
- A. waraka B. nyaraka C. karatasi D. marua

12. Barua hii inahusu nini?
 A. Ualishi wa shuleni
 B. Ualishi wa kula mlo
 C. Ualishi wa marafiki
 D. Ualishi wa sherehe
13. Barua uliyoisoma iliandikiwa nani?
 A. Diana
 B. John
 C. Rafiki
 D. Mzazi

Kutoka swali la 14 - 17, chagua jibu sahihi

14. Tegua kitendawili hiki: **Anakula lakini hashibi**
 A. Kijiko
 B. Mauti
 C. Tumbo
 D. Anga
15. Mzee yule ana tumbo kama
 A. kikapu
 B. mfuko
 C. chungu
 D. kiriba
16. Fumbua fumbo:
 Mwewe alikuwa juu ya mti huku akiwanyemelea vifaranga. Vifaranga walimwangalia. Iwapo vifaranga walikuwa watatu, je, ni macho mangapi yaliyomtazama mwewe?
 A. Matatu
 B. Sita
 C. Manne
 D. Matano
17. Jibu maagano yafuatayo:
Alamsiki _____
 A. binuru
 B. dawa
 C. ashakum
 D. ahsante

Soma habari ifuatayo kisha ujibu maswali 18-20

Hapo zamani za kale, chawa na nyigu walipanga kuhudhuria sherehe. Kabla ya sherehe, waliona ni vyema waoge na kujitayarisha vizuri. Kwa vile hawakutaka kujipangusa kwa taulo, walijianika juani ili wakauke.

Baada ya kupumzika jioni, waliona ni heri wavae ili wasichelewe kuhudhuria sherehe. Wote walikuwa na sime. Nyigu akanwambia rafiki yake amfungue kiunoni sime yake. Chawa akanfunga kwa nguvu karibu kukata kiuno cha nyigu. Alipoona wembamba wa kiuno cha mwenzake chawa alianza kucheka hadi pua yake ikapasuka.

Tangu siku hiyo, kiuno cha nyigu kikawa chembamba nayo pua ya chawa ikawa imepasuka.

18. Kichwa mwafaka cha kisa hiki ni
- A. Nyigu na sime
B. Kupasuka pua kwa chawa
C. Sherche ya nyigu
D. Chawa na nyigu
19. Rafiki ni nani kulingana na habari uliyoisoma?
- A. Mtu mrembo sana
B. Mtu wa ukoo wako
C. Mtu mnayependana
D. Anayekupa peremende
20. Kwa nini chawa alicheka sana?
- A. Alikuwa ameshiba sana
B. Alipoona wembamba wa kiuno cha nyigu
C. Alifurahishwa na sime
D. Nyigu alikuwa akicheka sana

Kutoka swali 21-25, chagua jibu bora zaidi kujazia viasho.

Shingo ___21___ Juma huuma kila anapolala bila mto. Hii ni ___22___ sehemu ngumu humwumiza anapoilalia. Maumivu hayo humsumbua kwa siku nyingi. Kwa hakika ___23___ hata zaidi ya siku saba. Shida kuu ni kwamba ___24___ hapendi kulalia mto hata kama anao. Yeye huteta kuwa anakosa starehe anapoulalia mto. Hebu nikuulize, si huu ni ___25___?

21. A. ya
B. la
C. cha
D. wa
22. A. kwasababu
B. kwa kua
C. kwa sababu
D. kwakuwa
23. A. huchukuwa
B. huchukua
C. huchukuliwa
D. huchukwa
24. A. yeye mwenyewe
B. yeye yenyewe
C. mimi mwenyewe
D. sisi wenyewe
25. A. msiba wa kutakiana
B. msimu wa maumivu
C. ujinga wa kupindukia
D. msiba wa kujitakia

Kutoka swali la 26 mpaka 40, chagua jibu lililo sahihi

26. Tambua aina za maneno yaliyopigiwa mistari.

Mtoto **mzuri** amekimbia hadi **shuleni**.

A. kivumishi, nomino

B. kielezi, kivumishi

C. kivumishi, kielezi

D. nomino, kitenzi

27. Chagua kundi lenye nomino katika ngeli ya **U-I** pekee

A. hakim, baharia, mtume

B. mpera, mkeka, gunia

C. pweza, mswaki, wembe

D. mti, mguu, mpira

28. Andika sentensi hii kwa wingi: **Mti huu ni mdogo sana.**

A. Miti hii ni midogo sana.

B. Jiti hili ni ndogo sana.

C. Mamiti haya ni madogo sana.

D. Majiti haya ni madogo sana.

29. Andika kinyume cha neno '**suka**'.

A. bomoa

B. fumua

C. fuma

D. songa

30. Chagua sentensi sahihi

A. Watu watisa walikula nyama.

B. Magari kumi na tatu yalinunuliwa.

C. Kalamu ya mwalimu ni mzuri.

D. Viatu vinane vimepigwa rangi.

31. Ni sentensi gani iliyo katika wakati ujao.

A. Aendi shuleni.

B. Ameenda shuleni.

C. Ataenda shuleni.

D. Huenda shuleni.

32. Watu walitoroka uwanjani

A. mmoja mmoja

B. moja moja

C. mmoja moja

D. kimoja kimoja

33. Ukitaka kumpimia mtu nguo utatumia


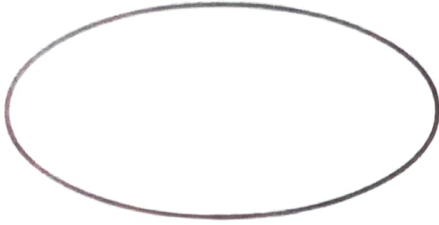
A. rula

B. utepe

C. mizani

D. dira

34. Tambua maumbo haya.



A. duara, mviringo

B. duara dufu, tufe

C. mviringo, duara

D. duara dufu, kopa

35. Kulala kwa mgongo na tumbo juu ni kulala

A. shagalabaghala

B. chali

C. kimbavumbavu

D. kifudifudi

36. Ni pambo lipi limeambatanishwa vilivyo?

A. Sikio - mapete

B. Mguu - kipini

C. Shingo - kikuba

D. Mkono - wanja

37. Tumia kiunganishi "kwa" ipasavyo.

A. Ameenda kwa nyumba.

B. Amina yuko kwa gari.

C. Petero anaishi kwa mzee Jaba.

D. Watoto wasicheze kwa kiwanja.

38. Ndugu na dada wa kike na kiume huitanaje?

A. Umbu

B. Mkoi

C. Mpwa

D. Kaka

39. Sisi _____ tunasoma.

A. wote

B. zote

C. nyote

D. sote

40. Tumia kiulizi kinachostahili: Mbuzi _____ waliochinjwa?

A. ngapi

B. zingapi

C. mangapi

D. wangapi

KENYA PRIMARY SCHOOL EDUCATION ASSESSMENT



GRADE 6 - 2022

CREATIVE ARTS & SOCIAL STUDIES

Time: 1 hour 40 minutes.

INSTRUCTIONS TO CANDIDATES (Read these instructions carefully)

1. You have been given this question booklet and a separate answer sheet. The question booklet contains 80 questions divided into **four** parts: Answer **ALL** the questions in **part 1-part 3**. In **part 4**, there are two sections. Choose the section that you have been prepared for and answer all the questions.

Do any necessary rough work in this booklet.

When you have chosen your answer mark it on the **ANSWER SHEET**, not in the question paper.

HOW TO USE THE ANSWER SHEET.

4. Use an ordinary pencil only.
5. Make sure that you have written on the answer sheet:-
YOUR ASSESSMENT NUMBER
YOUR NAME
NAME OF YOUR SCHOOL
NAME OF SUBJECT
6. Do not make any marks outside the boxes.
7. Keep your answer sheet as clean as possible and **DO NOT FOLD IT**.
8. For each of the questions 1-80 four answers are given. The answers are lettered A, B, C, D. In each case only **ONE** of the four answers is correct. Choose the correct answer from the choices.
9. On the answer sheet show the correct answer by drawing a **dark line** inside the box in which the letter you have chosen is written.

Example In the Question Booklet

22. The songs sang praising one's country or leader are known as
A. sacred songs
B. patriotic songs
C. lullaby songs
D. folk songs
The correct answer is **B**

On the answer sheet:

22. [A] [B] [C] [D] 23. [A] [B] [C] [D] 24. [A] [B] [C] [D] 25. [A] [B] [C] [D]

In the set of boxes number 22, the box with letter **B** printed in it is marked.

10. Your **dark line MUST BE** within the box.
11. For each question **ONLY ONE** box is to be marked in each set of four boxes.

This question paper consists of 12 printed pages.

© compasspress, 2022


TURN OVER

PART I: ART AND CRAFT (10mks)

1. The darkness or lightness of colour on an object is called

- A. proportion
- B. balance
- C. tonal value
- D. space

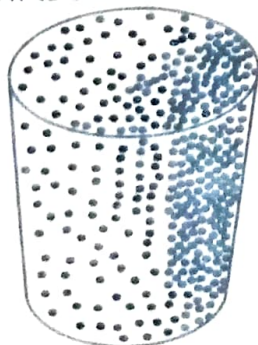
2. Roba drew a still life composition of a cup and jug as shown below.



What was lacking in his drawing?

- A. Space
- B. Proportion
- C. Texture
- D. Balance

3. The method of creating tonal value shown below is called



- A. cross hatching
- B. smudging
- C. stippling
- D. shading

4. Use of lines that cross over each other to create a tonal value is called

- A. stippling
- B. cross hatching
- C. smudging
- D. painting

5. Which of the following is NOT a primary colour?

- A. Green
- B. Red
- C. Yellow
- D. Blue

6. Which of the following is a three dimension construction of letter 'N'?

- A.
- B.
- C.
- D.

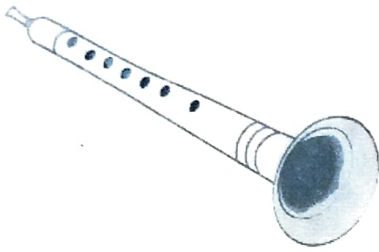
7. The three parts of a marionette are
- body, model, strings
 - strings, handle, model
 - handle, body, model
 - strings, handle, body
8. The sharpness and brightness of a photograph is called
- quality
 - background
 - focus
 - viewpoint
9. The process in the preparation of clay which involves pressing clay over and over again until the moisture is evenly distributed is called
- coiling
 - modelling
 - kneading
 - pressing
10. The technique of joining two or more pieces of leather using thongs for lacing when making an article is called
- lacing
 - thonging
 - tanning
 - weaving

PART 2: MUSIC (10mks)

11. A grade six learner was heard singing the line below of a stanza of a certain song:
- “Tunajivunia Kenya nchi yetu”** Which type of song was the learner singing?
- Sacred song
 - Topical song
 - Patriotic song
 - Folk song
12. What are the words of the second line of stanza two of the East African Community Anthem?
- Jumuiya Africa Mashariki
 - Viwe msingi wa Umoja wetu
 - Tufanye kazi sote kwa makini
 - Uzalendo pia mshikamano
13. Three part song involves singing in _____ voices.
- 3
 - 2
 - 4
 - 1

14. A song that belongs to people of the same community is called
- A. a sacred song
 - B. an action song
 - C. a patriotic song
 - D. a folk song

15. Which community in Kenya plays the wind instrument drawn below?



- A. Akamba
 - B. Kikuyu
 - C. Mijikenda
 - D. Luo
16. What safety precaution should you take when playing and sharing descant recorder?
- A. Throwing the descant recorder to one another
 - B. Cleaning the descant recorder before using
 - C. Separating and sharing the parts
 - D. Use without cleaning from your partner
17. What is the French rhythm name for four long sounds?
- A. Taa-aa-aa-aa
 - B. Ta-te-ta-te
 - C. Ta-ta-ta-ta
 - D. Taa-aa


18. Which one of the following note symbols is correctly matched with its name?

Note symbol	Note name
A.	Quiver
B.	Semi-breve
C.	Minim
D.	Crotchet

19. What is the solfa-notation for the hand sign drawn below?



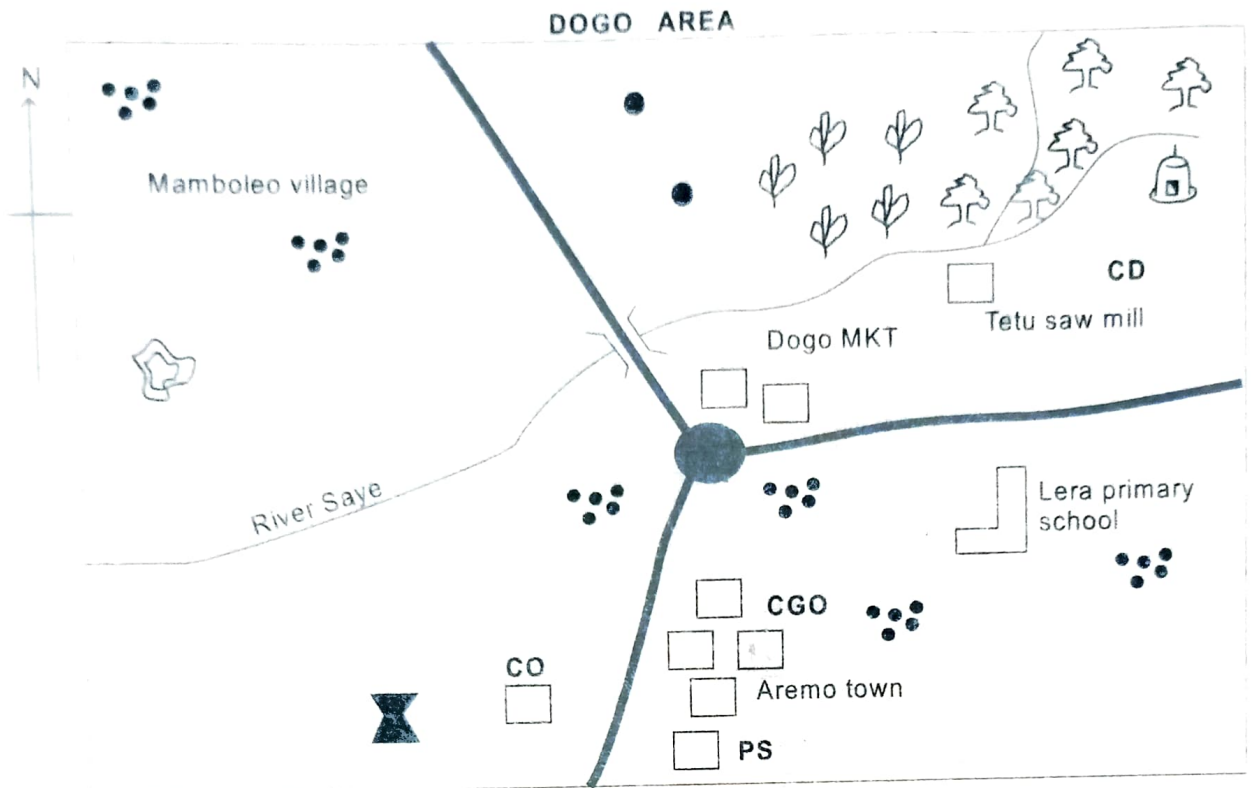
- A. doh
 - B. soh
 - C. reh
 - D. mi
20. What is the name of the part labelled X in the diagram below?



- A. Sling
- B. Sound box
- C. Skin membrane
- D. Tuning lace

PART 3: SOCIAL STUDIES (40mks)

Study the map of Dogo Area above and use it to answer questions 21-25



KEY 1cm Rep 1km

	Forest	CD	Cattle dip		Governor's monument		Tarmac road
	Quarry		Tea farms		Buildings		
CO	Chief's office	MKT	Market		Settlement		
PS	Police station		Shrine	CGO	County government office		

21. What is the likely religion of people in Dogo Area?
- Pagans
 - Traditionalists
 - Muslims
 - Christians
22. Which of the following is NOT an economic activity in Dogo Area?
- Fishing
 - Mining
 - Lumbering
 - Trading
23. What is one Historic built environment in Dogo Area?
- Shrine
 - Bridge
 - Buildings
 - Governor's monument
24. What is the general flow of river Saye?
- From North to South
 - From South to North
 - From North East to South West
 - From South West to North East

25. Business people in Dogo Area should seek for trading licences from
- County Government offices
 - Chief's office
 - Police station
 - Dogo market

26. Which of the following lists of countries are found in Eastern Africa?

- Kenya, Malawi, Somalia
- Tanzania, Uganda, Egypt
- Rwanda, Sudan, Ethiopia
- Somalia, Zambia, Kenya

27. Which of the following is FALSE about the position of countries in Eastern Africa?

- Kenya lies to the South of Tanzania
- Uganda lies to the West of Kenya
- Tanzania lies to the South East of Uganda
- South Sudan lies to the North of Uganda

28. Another name for Greenwich Meridian is

- Equator
- Prime Meridian
- Tropical of Cancer
- Tropical of Capricorn

29. Eastern Africa lies between latitudes

- 23°N and 41.9°S
- 3.9°N and 51°S
- 22°E and 51°E
- 23°N and 12°S

30. Which of the following is NOT one of the ways through which Kenya maintains good relations with her neighbours?

- Trade
- War
- Games and sports
- Use of common language

Below is a map of Kenya. Use it to answer questions

31- 33



31. The climatic region marked T is called

- Equatorial climate
- Tropical climate
- Modified Equatorial climate
- Desert climate

32. The relief feature at R is called

- Lokitipi plain
- Mt. Marsabit
- Chalbi desert
- Awara plain

33. The swamp marked S is called

- Lorian swamp
- Yala swamp
- Amboseli swamp
- Lokitipi swamp

34. Which of the following Historic built environment is correctly matched with its example?

	Historic built environment	Example
A.	Historic building	Fort Jesus
B.	Monuments	Hells Gate
C.	Cultural centres	Vasco da Gama pillar
D.	Museums	Bomas of Kenya

35. Which of the following consists of Bantu speakers in Kenya only?
- Akamba, Iteso, Ameru
 - Abaluhya, Mijikenda, Agikuyu
 - Abagusii, Abakuria, Maasai
 - Orma, Rendile, Borana
36. What was the original homeland of the Nilotes?
- Democratic Republic of Congo
 - Cameroon
 - South Sudan
 - North of Africa
37. Which of the following is FALSE about interdependence?
- Discourages tribalism
 - Promotes peace
 - Leads to exchange of culture
 - Undermines development
38. The number of people living in an area per square kilometre is called
- population density
 - population
 - settlement
 - migration
39. Which of the following methods of teaching young people were not used in traditional society?
- Narratives and stories
 - Reading and writing
 - Proverbs and sayings
 - Ceremonies and occasions
40. Who takes minutes during school staff meetings?
- Class teacher
 - Head teacher
 - Deputy head teacher
 - Senior teacher

41. The following are problems facing dairy farming in Kenya **except**
- poor road network
 - lack of capital
 - ready market
 - lack of storage

42. Which one is odd one out?
- Lilies
 - Oranges
 - Cabbages
 - Beans

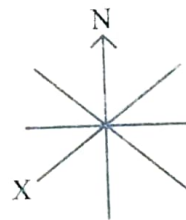
43. Which of the following minerals is correctly matched with its mining place?

	Mineral	Mining place
A.	Soda ash	Kimwerer in Kerio valley
B.	Fluorspar	Ngamia in Turkana county
C.	Limestone	Lake Magadi
D.	Diatomite	Kariandusi near Gilgil

44. Which of the fishing methods below is **NOT** an Inland fishing method in Kenya?
- Trawling
 - Net drifting
 - Hook and line
 - Basket traps
45. Which of the following is a National Park in Kenya?
- Maasai Mara
 - Tsavo East
 - Marsabit
 - Shimba Hills

46. What is the **MAIN** cause of road accidents in Kenya?
- Poor state of roads
 - Overloading
 - Careless driving
 - Road unworthy vehicles

47. Below are symbols of National Unity Which one is **NOT**?
- National Assembly
 - National Anthem
 - National flag
 - Public Seal
48. Which arm of the government makes laws?
- Judiciary
 - Legislature
 - Executive
 - President
49. Which one of the following is true about the Maasai and the Ameru traditional forms of government?
- Both were ruled by chiefs
 - Both leadership was hereditary
 - Leadership was in form of age sets
 - Both had a prophet and medicine man
50. Which one of the following is **NOT** a similarity between Kivoi wa Mwendwa and Mekatilili wa Menza?
- Both were long distance traders
 - Both were symbols of unity
 - Both defended welfare of their people
 - Both interacted with the Europeans
51. Which of the following is **not** an elective position in Kenya?
- Member of the County Assembly
 - President
 - Member of Parliament
 - Chief
52. Which of the following is **NOT** a quality of a good leader in the community?
- Organized
 - Arrogant
 - Honest
 - Punctual
53. A short statement of what a school believes in is called
- school mission
 - core values
 - school motto
 - school vision
54. Natural resources can be conserved by the following activities **except**
- planting trees
 - re-afforestation
 - defforestation
 - reducing pollution
55. Why are barbers important in the community?
- Shaving people
 - Selling goods
 - Making chairs
 - Preaching Good News
56. Below is a drawing of a compass point.



What is the labelled part marked X?

- East
- North West
- South East
- South West

57. Which one of the following contains only ways through which county government gets its money?
- Parking fees and grants
 - Fines and grants
 - Land rates and fines
 - Fines and licence fees

58. Which of the following is a peace education message?

- A. FIGHT OTHERS
- B. WORK TOGETHER
- C. ABUSE OTHERS
- D. JUDGE OTHERS

59. During which season do people harvest crops?

- A. Hot seasons
- B. Rainy seasons
- C. Dry seasons
- D. Wet seasons

60. Love for your country is called

- A. unity
- B. peace
- C. patriotism
- D. social justice

PART 4:

SECTION A: CRE (20mks)

61. Which one of the following is a talent?

- A. Reading
- B. Cooking
- C. Painting
- D. Cleaning

62. Which of the following is **NOT** a type of marriage?

- A. Registration
- B. Civil
- C. Christian
- D. Customary

63. Which of the following is **NOT** a value you can use to nurture your talents and abilities?

- A. Social injustice
- B. Integrity
- C. Patriotism
- D. Humility

64. The parable of the talents is also called the parable of

- A. sower
- B. three servants
- C. mustard seed
- D. prodigal son

65. Which of the following is **NOT** likely to cause child labour?

- A. Poverty
- B. Death of parents
- C. Need for cheap labour
- D. Attending school

66. What led to the fall of human beings according to Genesis 3:1-13?

- A. Obedience of Adam and Eve
- B. The snake
- C. Disobedience of Adam and Eve
- D. Nakedness

67. The following are values acquired from using the holy Bible as a guide. Which one is **NOT**?

- A. Unity
- B. Hatred
- C. Love
- D. Respect

68. The last book in the Old testament is called

- A. Malachi
- B. Genesis
- C. Matthew
- D. Revelation

69. Who was the wisest king of Israel?

- A. Saul
- B. David
- C. Solomon
- D. Ahab

70. As king Belshazzar and his noble men were going on with the party, a hand was seen writing on the wall. Who read and interpreted the writings on the wall?
- Solomon
 - Angel
 - Prophet
 - Daniel
71. Who contested with the prophets of Baal at mount Carmel?
- Elisha
 - Jacob
 - Elijah
 - David
72. What was Moses doing when God appeared to him in form of a burning bush?
- Preaching the word of God
 - Taking care of sheep
 - Sleeping
 - Playing in the field
73. By healing the paralysed man, Jesus showed that he had power over
- nature
 - death
 - mankind
 - sickness
74. Which of the following is NOT a gift of the Holy Spirit?
- Preaching
 - Healing
 - Faithfulness
 - Faith
75. Which one of the following is FALSE about God's promises to Abraham?
- Bless those who curse Abraham
 - Curse those who curse him
 - Many descendants
 - Make Abraham's name great
76. Who saved Balaam from being killed?
- God
 - Angel
 - Donkey
 - King Balak
77. Who helped Pharaoh interpret his dreams?
- Moses
 - Jacob
 - Joseph
 - Angel
78. Believers were first called christians in the town of
- Jerusalem
 - Jericho
 - Galilee
 - Antioch
79. Which of the following is a good moral when using social media?
- respecting others
 - Abusing others
 - Bullying others
 - Telling lies
80. Job a grade six boy finds sh 100 note in the playing field. What should Job do with the money?
- Buy something with it
 - Take it to the teacher
 - Share it with his friends
 - Take it to his mother

SECTION B: IRE (20mks)

61. Which statement BEST describes Al-Humazah? Al-Humazah is a person who
- A. backbites others
 - B. spreads lies about others
 - C. spend time and wealth to please others
 - D. performs many good deeds
62. After school, you heard your friends complaining that the assignments given by their teacher was too much for them to do. Remembering the teachings of Surah Al-Asi, what would you do?
- A. Report to the head teacher
 - B. Advise them not to do the work
 - C. Encourage them to practise patience and do the assignment
 - D. report the matter to the parents and the academic master
63. Mahmud wanted to know about the teachings of Surah Al-Takathur. Help him to identify the correct teaching from the statements below. The Surah teaches us to
- A. waste time and money on worldly pleasures
 - B. prepare for the Day of Judgement
 - C. perform good deeds and advise others to be patient
 - D. use our time and money to invest for our hereafter
64. In which Surah does Allah(SWT) describe what will happen on the Day of Resurrection?
- A. Surah Al-Humaza
 - B. Surah At-Takathur
 - C. Surah Al-Qariah
 - D. Surah Al-Asr
65. Grade 6 learners were asked to talk about the teachings of the Hadith on purity of actions. Among the learners who said the correct teachings of the Hadith?
- A. Halima- When performing any good deed, everybody should know about it
 - B. Aisha-I should be proud of my beauty and wealth
 - C. Hafsa-My intention should be sincerely for Allah(SWT)
 - D. Warda- I should purify my heart from some sins I want
66. Saleem described how Muslims clothes should be. Using the statements below, which statement is exclusive on Islamic guidelines for clothes worn by male only.
- A. The clothes must not be transparent
 - B. The clothes must be above the ankle
 - C. The clothes must not be of opposite gender
 - D. The clothes must be modest
67. A Muslim can earn wealth through the following ways **except** one. Which one?
- A. Masonary
 - B. Farming
 - C. Carpentry
 - D. Gambling
68. Suleiman and his sister Warda were going home from school. When they reached another homestead, a dog appeared in front of them and started barking at them. In this situation, what attribute of Allah should they call upon for protection from the dog?
- A. Al-Ghaffaar
 - B. Al-Hafidh
 - C. Al-Aliim
 - D. Al-Hakam

69. Which one of the following is **not** a characteristic of angels?
- Take different forms and shapes
 - Have no free will
 - Are visible
 - Do not eat or drink
70. Which one of the following is the main reason why Muslims perform Saum?
- To remember the poor
 - Is good for our health
 - Our sins are forgiven
 - To attain Taqwa
71. The following learners were asked to tell situations that could make them practise patience. Who gave an incorrect answer?
- Kassim-Loss of wealth
 - Hashim-Death of a loved one
 - Daud-When angry
 - Bashir - When sleeping
72. Which statement is true according to Islamic etiquette in a wedding celebration?
- Men and women should mix
 - The poor are invited
 - There is wastage of food
 - Unlawful music is played
73. Three characters of prophet Muhammad(SAW) are portrayed in the story of his journey to Taif **except** one. Which one?
- Perseverant
 - Patient
 - Generous
 - Forgiving
74. Which one of the following is an act of Swadaqah?
- Playing football
 - Smiling at your friend
 - Watching television
 - Eating delicious food
75. _____ is the only Fardh swalah which has both Qabliyah and Ba'diyah prayers?
- Isha
 - Fajr
 - Maghrib
 - Dhuhr
76. Which one of the following things can make your swalah NOT accepted if they come into contact with clothes you are wearing during Swalah?
- Soup
 - Vomit
 - Dust
 - Oil
77. Which one of the following pillars of Islam does **not** require physical fitness?
- Zakat
 - Saum
 - Hajj
 - Swalah
78. The following are some of the obligations to our relatives. Choose the **best** obligation from the choices given.
- visiting the sick among them
 - keep off harm from them
 - knowing their conditions and helping them
 - giving them presents
79. Apart from performing swalah, which other form of Ibadah can a Muslim **not** perform without being in a state of wudhu?
- Saum
 - Sleeping
 - Zakat
 - Performing Tawaf
80. The following learners prepared themselves for Dhuhr prayer. Who among them did **not** observe conditions of swalah correctly?
- Hashim-prayed at 11am for Dhuhr prayer
 - Musa - performed wudhu before prayers
 - Swalah - prayed with clean clothes
 - Halima - her Hijab was not transparent

KENYA PRIMARY SCHOOL EDUCATION ASSESSMENT



GRADE 6 - 2022

INTEGRATED SCIENCE

Time: 1hr. 30 Mins.

INSTRUCTIONS TO CANDIDATES (Read these instructions carefully)

1. You have been given this question booklet and a separate answer sheet. The question booklet contains 60 questions. Answer **ALL** the questions in each section.
2. Do any necessary rough work in this booklet.
3. When you have chosen your answer mark it on the **ANSWER SHEET**, not in the question paper.

HOW TO USE THE ANSWER SHEET.

4. Use an ordinary pencil only.
5. Make sure that you have written on the answer sheet:-
YOUR ASSESSMENT NUMBER
YOUR NAME
NAME OF YOUR SCHOOL
NAME OF SUBJECT
6. Do not make any marks outside the boxes.
7. Keep your answer sheet as clean as possible and **DO NOT FOLD IT**.
8. For each of the questions 1-60 four answers are given. The answers are lettered A, B, C, D. In each case only **ONE** of the four answers is correct. Choose the correct answer from the choices.
9. On the answer sheet show the correct answer by drawing a **dark line** inside the box in which the letter you have chosen is written.

Example In the Question Booklet

49. The ability of soil to allow water to pass through its particles is called
- A. drainage
 - B. texture
 - C. capillarity
 - D. water retention

The correct answer is A

On the answer sheet:

47. [A] [B] [C] [D] 48. [A] [B] [C] [D] 49. [A] [B] [C] [D] 50. [A] [B] [C] [D]

In the set of boxes number 49, the box with letter A printed in it is marked.

10. Your **dark line MUST BE** within the box.
11. For each question **ONLY ONE** box is to be marked in each set of four boxes.

This question paper consists of 12 printed pages.


© compasspress, 2022

TURN OVER

SECTION A:

SCIENCE & TECHNOLOGY (25mks)

1. The diagram below shows the external parts of a plant.



What is the function of the part labelled T?

- A. To protect seeds
 - B. For exchange of gases
 - C. Anchorage
 - D. Grow into new plant
2. Which of the following types of plants is **NOT** correctly matched with its example?

	Type of plant	Example
A.	Shrubs	Mango
B.	Trees	Avocado
C.	Herbs	Coriander
D.	Grasses	Nut grass

3. Which one of the following is **NOT** a safety precaution when handling plants?
- A. Wash your hands after handling plants
 - B. Walk bare foot when observing plants
 - C. Wear protective clothing
 - D. Wear goggles to protect the eyes
4. Digested food is absorbed in which part of the human digestive system?
- A. Stomach
 - B. Ileum
 - C. Colon
 - D. Liver
5. Which one of the following types of teeth and their uses is **FALSE**?
- A. Molars are used for chewing and grinding
 - B. Canines are used for tearing and gripping
 - C. Incisors are used for cutting and biting
 - D. Pre-molars are used for chewing and gripping

6. Which of the following is **NOT** an effect of air pollution?
- A. Vomiting and diarrhoea
 - B. Breathing problems
 - C. Eye irritation
 - D. Poor visibility
7. Which of the following is the **BEST** way of controlling water pollution?
- A. Releasing untreated sewage into water source
 - B. Proper waste disposal
 - C. Wearing gumboots
 - D. Building latrines near water sources
8. A small pin sinks in water while large piece of plastic material floats on water. This is because of difference in
- A. size
 - B. shape
 - C. type of material
 - D. weight
9. A pull or push on an object is called
- A. force
 - B. energy
 - C. mass
 - D. size
10. Reflected sound is called
- A. shadow
 - B. echo
 - C. volume
 - D. pitch
11. Which of the following consists of only materials that allow some light to pass through them?
- A. Bathroom windows, clear glass, stones
 - B. Skylights, wood, clear water
 - C. Ambulance windows, stones, wood
 - D. Skylights, oiled white paper, bathroom windows

12. Below are characteristics of a certain type of cloud:-

- i) *Low in the sky*
- ii) *Seen during hot afternoons*

Which type of cloud is described above?

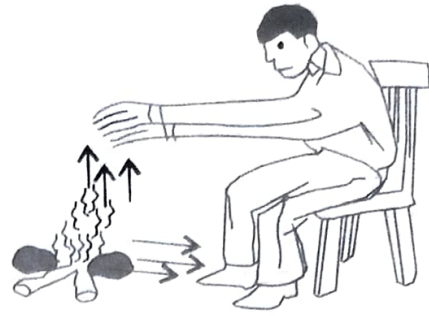
- A. Cirrus
- B. Stratus
- C. Cumulus
- D. Nimbus

13. What is the name of the phase of the moon drawn below?



- A. Gibbous
- B. Crescent
- C. Full moon
- D. New moon

14. Jacob a grade five pupil warmed himself next to fire as shown below.



Through which methods of heat transfer does the heat reach his legs and hands?

	Legs	Hands
A.	Radiation	convection
B.	Radiation	conduction
C.	Convection	radiation
D.	Convection	radiation

15. Which one of the following is **NOT** an effect of sound pollution?

- A. Loss of hearing
- B. Poor concentration
- C. Allows good communication
- D. Sleep disturbance

16. Why does objects thrown up the air fall back down? Due to

- A. friction
- B. gravity
- C. mass
- D. upthrust

17. Red litmus paper turns _____ when put in lemon juice.
- A. blue
 - B. green
 - C. pink
 - D. red

18. The **BEST** method of managing plastic waste is by
- A. re-using
 - B. reducing
 - C. recycling
 - D. burying

19. Which of the following is **NOT** an external body parasite?
- A. Pinworm
 - B. Jiggers
 - C. Lice
 - D. Mites

20. Below are signs and symptoms of waterborne diseases:-
- i) *Fever*
 - ii) *Loss of appetite*
 - iii) *Body rashes*
 - iv) *Headache*
 - v) *Dehydration*

Which one among the signs and symptoms are for typhoid?

- A. i, ii, iv
- B. i, iii, iv
- C. iii, iv, v
- D. ii, iii, iv

TECHNOLOGY

21. Study the coding patterns below and answer the question given

$$\text{Oval} \times \text{Oval} = 36$$

$$\text{Star} + \text{Star} + \text{Oval} = 20$$

$$\text{Oval} + \text{Cup} + \text{Star} = 25$$

What is $\text{Cup} \times \text{Oval} ?$

- A. 84
- B. 72
- C. 42
- D. 18

22. Which of the following parts of a digital device is NOT correctly matched with its function?

	Digital device	Function
A.	Monitor	Displays what is going on
B.	Key-board	Types into the computer
C.	Processor	Controls and process programs
D.	Cables	Give instructions

23. Which of the following is a proper use of digital devices?

- A. Watching pornography
- B. Playing adult games
- C. Recording videos of class activities
- D. Taking photographs when naked

24. Which of the following shows the correct procedure for saving a document?

- A. Choose file, click save, save As
- B. Save, choose file, save As
- C. Save As, save, choose file
- D. Save, save As, choose file

25. Which of the following contains only components of a word document?

- A. Title bar, status bar, blocks
- B. Typing area, status bar, title bar
- C. Stage, title bar, status bar
- D. Status bar, typing area, sprite

SECTION B:

HOME SCIENCE (10mks)

26. Four learners in grade six were asked by their teacher to tell changes that take place in girls only during adolescence stage.

Moraa - Develops deep voice

Njeri - Hair grows in the groin

Mbula - Menstruation starts

Achieng - Develop pimples

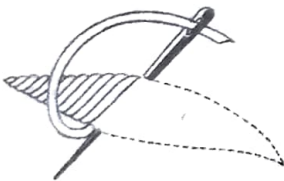
Who among the learners gave the correct answer?

- A. Mbula
- B. Njeri
- C. Achieng
- D. Moraa

27. Which of the following is **NOT** a good grooming practise for the adolescents?
- A. Combing their hair
 - B. Changing their sanitary pads irregularly
 - C. Washing their clothes
 - D. Wearing clean decent clothes

28. Why should adolescent girls take foods rich in iron?
- A. For strong teeth
 - B. For energy
 - C. For body building
 - D. To replace blood lost during menstruation

29. What is the name of the decorating stitch drawn below?



- A. Chain stitch
- B. Satin stitch
- C. Stem stitch
- D. Loop stitch

30. Which of the foods listed below **CANNOT** be cooked by deep frying method?
- A. Maandazi
 - B. Fish
 - C. Green maize
 - D. Chicken

31. A child was noticed with the following signs and symptoms.
- i) *Sunken eyes*
 - ii) *Wrinkled skin*
 - iii) *Excessive loss of weight*
 - iv) *Alertness*
 - v) *Stunted growth*

Which nutritional deficiency disease was the child suffering from?

- A. Marasmus
- B. Kwashiorkor
- C. Rickets
- D. Goitre

32. Which of the following is **NOT** a safety precaution to observe when using information from an advertisement?

- A. Follow instructions as provided
- B. Read information and labels
- C. Buy goods without reading
- D. Make comparisons before choosing

33. Which of the following consists of common illnesses that can be prevented by doing the following.

- i) *Wearing masks*
- ii) *Social distancing*
- iii) *Using handkerchiefs*

- A. Diarrhoea, cough
- B. Cough, Covid-19
- C. Covid-19, vomiting
- D. Vomiting, cough

34. You have been given the following materials:-

- i) *A stick*
- ii) *Feather*
- iii) *Rubber band*

Which cleaning tool can you make from the

materials above?

- A. Mop cloth
- B. Dust bin
- C. Broom
- D. Brush

35. Which of the following shows the correct order of steps in laundry work?

- A. Washing, sorting, mending, soaking
- B. Sorting, soaking, mending, washing
- C. Mending, soaking, sorting, washing
- D. Mending, sorting, soaking, washing

SECTION C:

AGRICULTURE (10mks)

36. The type of soil erosion where rain-drops hit the ground and breaks the soil forming small circular depressions is called

- A. Gully erosion
- B. Splash erosion
- C. Rill erosion
- D. Sheet erosion

37. What is the **BEST** method of controlling gulley erosion?
- Planting cover crops
 - Building terraces
 - Contour farming
 - Building gabions
38. The process of collecting soil from soil deposition sites and using it to replace the lost top soil is called
- soil recovery
 - soil erosion
 - run-off
 - soil deposits
39. Which of the following materials are **BEST** for making organic waste pit?
- Wood chippings, garden weeds, broken egg shells
 - Coconut husks, fallen leaves, vegetable wastes
 - Grass chippings, broken pieces of glass, fruit peelings
 - Maize cobs, metal objects, garden weeds
40. The following are farming practices that conserve water in the soil. Which one is **NOT**?
- Mulching
 - Shading
 - Terracing
 - Planting cover crops
41. Which of the following is the correctly matched animals in the farm and their uses.

	Animals	Their uses
A.	Cat	Gives fur
B.	Pig	Gives pork and bacon
C.	Horse	Security
D.	Rabbit	Gives honey

42. The removal of very weak seedlings that are overcrowded in one place is called
- thinning
 - gapping
 - sowing
 - weeding

43. Grade six learners went for nature study and observed the structure drawn below in a certain farm.



What was the use of the structure in the farm?

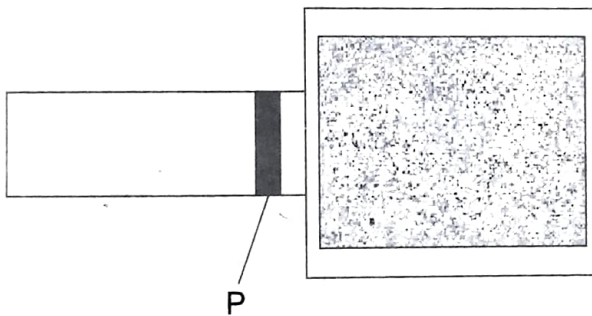
- A. Beauty in the farm
 - B. Attract animals in the farm
 - C. For fun in the farm
 - D. Scare away animals in the farm
44. Why do container gardening practises important?
- A. Waste of time
 - B. Generate income
 - C. Practised by children only
 - D. Takes a large space of land
45. Why is it important to keep records of various activities in the farm such as date of planting?
- A. To keep the records in the files
 - B. To stop farm workers from stealing crop products
 - C. To help estimate date of harvesting
 - D. To employ many workers

SECTION D:

PHYSICAL & HEALTH EDUCATION (15mks)

46. Which one of the following shows the other name for bunch start?
- A. Medium start
 - B. Bullet start
 - C. Crouch start
 - D. Standing start
47. Which of the following is a type of finish technique in races?
- A. Shoulder shrug
 - B. Scissor technique
 - C. Standing technique
 - D. Walking technique
48. The type of baton exchange where the out-going runner receives the baton without seeing it being placed onto the hands is called
- A. visual baton exchange
 - B. closed eye baton
 - C. non-visual baton exchange
 - D. open-eye baton exchange

49. The following causes conflict in a group during play **except**
- poor communication
 - lack of planning
 - poor selection of a leader
 - friendly relationship
50. The following are ways of managing strain injury. Which one is **NOT**?
- Apply hot water on the muscle
 - Rest the strained muscle
 - Raise the injured part
 - Protect from further injury
51. Below is a drawing of a long jump facility.



Name the part labelled P.

- Take off board
 - Landing pit
 - Run way
 - Lane
52. The type of rope skipping where you begin to tap the ground with the heel of one foot and then keep on alternating the feet is called
- skier
 - straddle
 - straddle cross
 - heel taps
53. The following are responsibilities of infield players in softball **except**
- catching high balls
 - catching low balls
 - cover the base
 - fielding ground balls
54. How do you approach the ball in soccer when passing using outside of the foot?
- Upright
 - Bent forward the whole body
 - Upper body slightly bent
 - Bending backward the whole body

55. What does spirit of the game in Frisbee involve?

- A. Space unawareness
- B. Unfairness
- C. Unclear communication
- D. Safe play

56. The type of swimming stroke where the body faces downwards and is in a streamlined position is called

- A. breast stroke
- B. back stroke
- C. side stroke
- D. butterfly stroke

57. What is the name of playing technique drawn below in the game of volleyball?



- A. Volley
- B. Underarm service
- C. Dig
- D. Overarm service

58. What does a score in a game of Rugby called?

- A. Run
- B. Goal
- C. Try
- D. Tag

59. What is the standard measurement of a volleyball pitch length?

- A. 9m
- B. 6m
- C. 3m
- D. 18m

60. When do you score a full rounder in a game of rounders?

- A. Batter reaches 4th post in one hit
- B. Batter reaches 3rd post in one hit
- C. Batter reaches 2nd post in one hit
- D. Batter reaches 4th post in two hits

KENYA PRIMARY SCHOOL EDUCATION ASSESSMENT



GRADE 6 - 2022

MATHEMATICS

Time: 2hrs

INSTRUCTIONS TO CANDIDATES (Read these instructions carefully)

1. You have been given this question booklet and a separate answer sheet. The question booklet contains 40 questions.
2. Do any necessary rough work in this booklet.
3. When you have chosen your answer mark it on the **ANSWER SHEET**, not in the question paper.

HOW TO USE THE ANSWER SHEET.

4. Use an ordinary pencil only.
5. Make sure that you have written on the answer sheet:-
YOUR ASSESSMENT NUMBER
YOUR NAME
NAME OF YOUR SCHOOL
NAME OF SUBJECT
6. Do not make any marks outside the boxes.
7. Keep your answer sheet as clean as possible and **DO NOT FOLD IT**.
8. For each of the questions 1-40 four answers are given. The answers are lettered A, B, C, D. In each case only **ONE** of the four answers is correct. Choose the correct answer from the choices.
9. On the answer sheet show the correct answer by drawing a **dark line** inside the box in which the letter you have chosen is written.

Example In the Question Booklet

21. Write 39 in Roman numbers.

- A. XXXIX
- B. XLIX
- C. XXIX
- D. LXIX

The correct answer is A

On the answer sheet:

21. [A] [B] [C] [D] 22. [A] [B] [C] [D] 23. [A] [B] [C] [D] 24. [A] [B] [C] [D]

In the set of boxes number 21, the box with letter A printed in it is marked.

10. Your **dark line MUST BE** within the box.
11. For each question **ONLY ONE** box is to be marked in each set of four boxes.

This question paper consists of 8 printed pages.

© compasspress, 2022

1. In a certain county, there were 2139408 registered voters. During a group activity in a Mathematics lesson, learners discussed the position of each digit and recorded in the chart below.

Place value	Millions	Hundreds of thousands	Tens of thousands	Thousands	Hundreds	Tens	Ones
Digit				X			

Which digit did they write in the place marked X?

- A. 9
 B. 4
 C. 3
 D. 1
2. The government distributed a total of 4090578 textbooks to learners in the country. What is the total number of books written in words?
- A. Four million ninety thousand five hundred and seventy eight
 B. Forty million ninety thousand five hundred and seventy eight
 C. Four million nine thousand five hundred and seventy eight
 D. Four million ninety five thousand and seventy eight
3. Soi bought 94825 tree seedlings. He planted 68904 tree seedlings in the first week and the rest in the second week. How many tree seedlings did he plant in the second week?
- A. 167729
 B. 26921
 C. 35921
 D. 25921

4. Some grade 5 learners were playing a number game using number cards. The cards were labelled with digits 8, 0, 2, 5, 4 and 3. They arranged the cards to form the smallest number. What is the value of digit 3 in the number formed?

- A. Thousands
 B. Three thousand
 C. Thirty thousand
 D. Three hundred

5. A matatu conductor is paid sh 450 everyday. How much was he paid from 4th January to 4th March 2020?

- A. Sh 27900
 B. Sh 27450
 C. Sh 27000
 D. Sh 26550

6. The number of people who were tested for Covid-19 in four sub-counties were as shown in the table below.

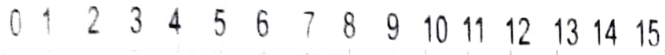
Sub-county	Umoja	Uwezo	Fadhili	Amani
No. of people	1728	2202	1571	1692

Which one of the following is the correct way of writing the number of people from the smallest to the largest?

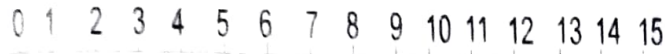
- A. 2202, 1728, 1692, 1571
 B. 1571, 1628, 2202, 1728
 C. 1571, 1692, 1728, 2202
 D. 1728, 2202, 1571, 1692

7. Lucy and Alice were skipping on the number line from 0

Lucy



Alice



Lucy skipped 4 steps while Alice skipped 3 steps. At what point on the number line will they skip again from the same point?

- A. 0
B. 1
C. 7
D. 12
8. In a certain month, the electricity bill of a school was sh 3581. The secretary rounded off the bill to the nearest thousands and paid off. How much money did the secretary pay?
- A. Sh 4000
B. Sh 3500
C. Sh 3580
D. Sh 3000
9. Four fruit vendors bought fruits as follows: Nyawira 2044, Nafula 2056, Anyango 1800 and Yiamit 1792. They each sold their fruits in groups of five. Who did not have any remaining fruits?
- A. Nafula
B. Anyango
C. Yiamit
D. Nyawira

10. A trader had two bags of rice 30 kg and 20 kg. She put the rice into smaller bags of equal mass. What is the greatest mass of each of the smaller bags she obtained by sub-dividing the rice equally without a remainder?

- A. 5
B. 60
C. 10
D. 600

11. What is the missing number in the pattern below? 20, 24, 32, 48, 80, _____

- A. 64
B. 128
C. 84
D. 144

12. Work out: $24 \div 8 \times 5 + 12 - 17$

- A. 27
B. 10
C. 15
D. 5

13. Laban had wires of lengths $\frac{1}{2}$ m, $\frac{3}{4}$ m, $\frac{5}{8}$ m and $\frac{1}{6}$ m. He arranged the wires from the shortest to the longest. Which one of the following is the correct order?

- A. $\frac{1}{6}, \frac{1}{2}, \frac{5}{8}, \frac{3}{4}$
B. $\frac{3}{4}, \frac{5}{8}, \frac{1}{2}, \frac{1}{6}$
C. $\frac{1}{2}, \frac{1}{6}, \frac{3}{4}, \frac{5}{8}$
D. $\frac{1}{6}, \frac{1}{2}, \frac{3}{4}, \frac{5}{8}$

14. After selling meat in the morning, a butcher had $\frac{2}{3}$ of meat remaining by noon. In the afternoon he sold $\frac{4}{9}$ of the meat and sold the rest in the evening. What fraction of the meat did he sell in the evening?

- A. $\frac{2}{9}$
- B. $\frac{1}{9}$
- C. $\frac{2}{6}$
- D. $\frac{6}{12}$

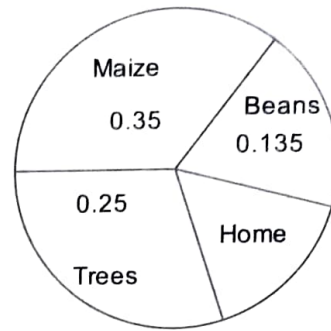
15. During a Mathematics activity, a group formed a number that had 3 ones, 6 tenths, 7 hundredths and 4 thousandths. Which one of the following numbers did they form?

- A. 0.3674
- B. 3.674
- C. 30.674
- D. 36.074

16. In the school athletics competition, four athletes completed the 5000 metre race as follows: Kirui 16.97, Wanjiru 16.92, Moraa 16.99 and Chebet 16.95. What is the correct order of arranging the athletes from the fastest to the slowest?

- A. Moraa, Chebet, Wanjiru, Kirui
- B. Kirui, Moraa, Chebet, Wanjiru
- C. Wanjiru, Chebet, Kirui, Moraa
- D. Moraa, Kirui, Chebet, Wanjiru

17. The circle below shows how Nkirote divided her land.



What portion of the land was covered by maize, beans and trees?

- A. 0.735
- B. 0.725
- C. 0.635
- D. 0.265

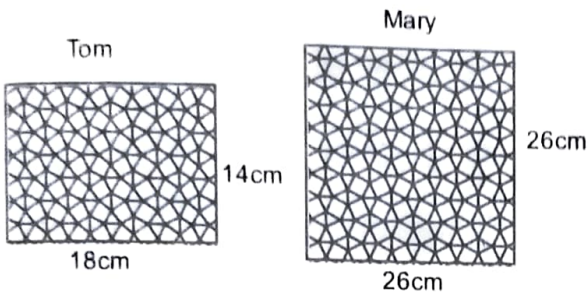
18. The distance from Mutua's home to county headquarters is 46km 200m. He cycled for 38km 450m and got a puncture. What distance was he left with to reach the county headquarters?

- A. 84km 650m
- B. 7km 750m
- C. 8km 750m
- D. 8km 250m

19. The length of a road is 7km. A contractor tarmacked the whole road. What length in metres of the road was tarmacked?

- A. 70
- B. 7000
- C. 700
- D. 70000

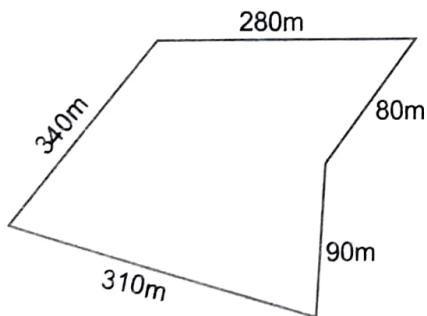
20. Below are table mats which were made by two people.



What is the difference in the areas of the table mats they made?

- A. 252cm^2
- B. 424cm^2
- C. 676cm^2
- D. 928cm^2

21. The diagram below shows a school compound.



The head teacher walked round the school compound to check if it was fenced properly.

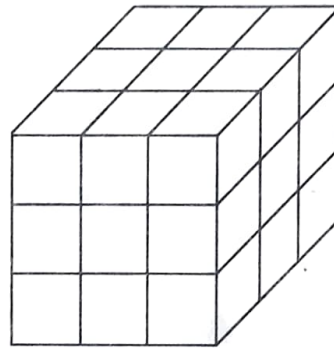
How many metres did she cover?

- A. 1100
- B. 1010
- C. 1000
- D. 900

22. Owang' dug a hole to plant a tree seedling. The hole was 8cm long, 9cm wide and 12cm deep. What volume of soil did he remove from the hole?

- A. 29cm^3
- B. 72cm^3
- C. 108cm^3
- D. 864cm^3

23. Sulciman used small cubes to make a big cube like the one shown below.



How many small cubes did he use?

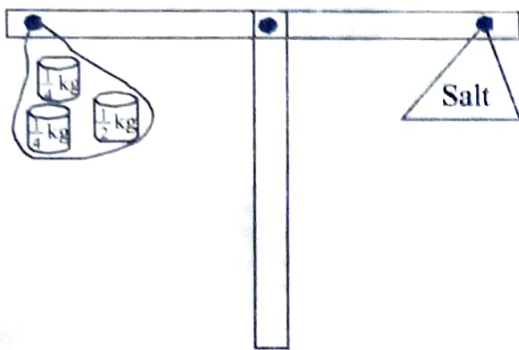
- A. 9
- B. 18
- C. 24
- D. 27

24. A trader had 72kg of sugar. She repacked the sugar into quarter kilogram packets. How many packets did she get?

- A. 18
- B. 24
- C. 144
- D. 288

25. Amin imported 8452kg of fertilizer. He sold 6370kg of the fertilizer to farmers. How many kilograms of fertilizer remained?
- A. 14822
B. 2092
C. 2082
D. 1982

26. Muthoni used a beam balance to measure the mass of salt as shown below.



What is the mass of salt in kilograms?

- A. 1kg
B. $1\frac{1}{2}$ kg
C. $2\frac{1}{2}$ kg
D. 3kg
27. A construction company bought 350kg of cement, 946kg of sand and 564kg of ballast. What is the total mass of the materials the company bought?
- A. 1860
B. 1510
C. 1296
D. 914
28. Mwachia's cow produced 25000ml of milk everyday. How many litres does the cow produce each day?
- A. 2500
B. 250
C. 25
D. $2\frac{1}{2}$
29. A petrol station had 362419 litres of petrol. A total of 98320 litres of the petrol was sold in one hour. How much petrol remained?
- A. 274099
B. 264099
C. 274199
D. 264199
30. Miriam divided 19 minutes 30 seconds by 6. What answer did she get?
- A. 3 minutes 5 seconds
B. 3 minutes 50 seconds
C. 3 minutes 15 seconds
D. 3 minutes 20 seconds
31. Auma took 46 minutes 30 seconds to wash 9 blankets. She took equal amount of time to wash one blanket. How long did she take to wash one blanket?
- A. 5 minutes 10 seconds
B. 6 minutes 10 seconds
C. 5 minutes 15 seconds
D. 5 minutes 14 seconds

32. Which one of the following is an importance of budget?

- A. Enables us to buy everything
- B. Helps us to work hard to spend
- C. Helps us to spend all the money
- D. Helps us to spend wisely and save

33. Godia earns a salary every month. He spends part of it and saves sh 1200 every month. How much does he save in 2 years?

- A. Sh 28800
- B. Sh 14400
- C. Sh 36000
- D. Sh 33600

34. Omwayo took 6 hours 28 minutes to drive to the town. Lwanya took 5 hours 25 minutes. How much more time did Omwayo took to drive to town than Lwanya?

- A. 2 hours 3 minutes
- B. 1 hour 3 minutes
- C. 1 hour 30 minutes
- D. 10 hours 53 minutes


35. Below is a price list in Amani's shop

Item	Price
One packet of flour	Sh 140
Loaf of bread	Sh 55
1 kg of cooking fat	Sh 238
1 kg of sugar	Sh 135
$\frac{1}{2}$ kg of salt	Sh 56

Mareb bought one packet of flour, two loaves of bread, a packet of salt. She paid for the items using sh 500 note. How much balance did she get?

- A. Sh 306
- B. Sh 249
- C. Sh 222
- D. Sh 194

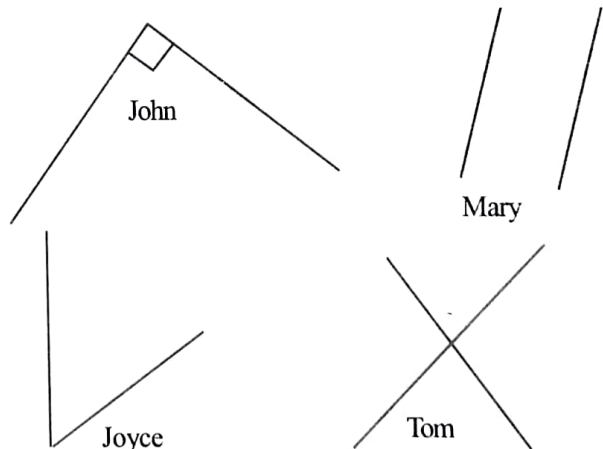
36. Below is a clock face



Which one of the following angles have been formed by the hour and minute hands of the clock?

- A. Reflex
- B. Obtuse
- C. Acute
- D. Right angled

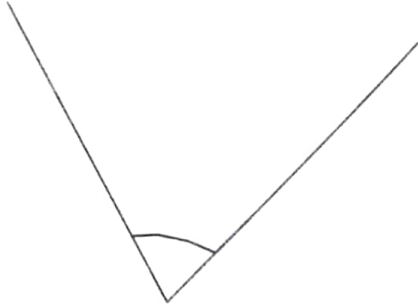
37. During a Mathematics lesson, a teacher asked four learners to draw perpendicular lines. They drew as follows:



Who was correct?

- A. John
- B. Mary
- C. Joyce
- D. Tom

38. Mwaniki is your group member. He is unable to use a protractor to measure the angle drawn below. Measure the angle and show him how to measure the angle.



What is the measure of the angle?

- A. 75°
- B. 105°
- C. 85°
- D. 115°

39. Mutembei had x books. A quarter of the books is 12. How many books does Mutembei have?

- A. 2
- B. 3
- C. 36
- D. 48

40. In a class, some learners chose their favourite subjects as follows.

Subject	Tally marks	No. of learners
Maths		12
English		8
Kiswahili		4
Science and Technology		16

Which one of the following is the correct way of representing the number of learners using tally marks?

	A	B	C	D
Maths	### ### //	### ## //	## ### //	// ## ##
English	#####	### ///	### ///	//// #
Kiswahili	##	////	##	////
Science and Technology	##### #####	### ## ## /	## ### /////	### ## ////