

**KPSEA REVEALED-22**  
**GRADE 6 TRIAL TWO**

**2023 ACADEMIC YEAR**

**FOR MARKING SCHEMES:**

**ORDER ONLINE AT:**

**[www.kenyaeducators.co.ke](http://www.kenyaeducators.co.ke)**

**OR**

**CONTACT:**

**Mr Machuki – 0724333200**

**KENYA EDUCATORS CONSULTANCY**



**Pinpoint Publishers**  
Enriching your knowledge

# KPSEA REVEALED

Kenya Primary School Education Assessment

**GRADE SIX**

**202501**

**— ENGLISH LANGUAGE — 2022**

**1hour**

**READ THESE INSTRUCTIONS CAREFULLY**

1. You have been given this question booklet and a separate answer sheet. The question booklet contains 30 questions
2. When you have chosen your answer, mark it on the **ANSWER SHEET**, not in this question booklet.

**HOW TO USE THE ANSWER SHEET**

3. Use an ordinary pencil only.
4. Confirm that the answer sheet provided with has the following:  
  

**YOUR ASSESSMENT NUMBER**  
**YOUR NAME**  
**NAME OF YOUR SCHOOL**  
**NAME OF SUBJECT**
5. Do not make any marks outside the boxes.
6. Keep your answer sheet as clean as possible and do not fold it.
7. For each of the questions 1 - 30, four choices are given. The answers are lettered A, B, C and D in each case, only **ONE** of the four choices is correct. Choose the **correct** answer.
8. On the answer sheet, the correct answer is to shown by drawing a **dark line** inside the box in which the letter you have chosen is written.

**Example**

**In the Question booklet**

15. Choose the alternative that best completes the sentence.

We are working hard in school, \_\_\_\_\_ ?

- A. are we
- B. isn't it
- C. aren't we
- D. don't we

The correct answer is C

**On the answer sheet.**

In the set of boxes numbered 15, draw a dark line inside the box with the letter C printed in it as indicated below.

**15** [A] [B] [C] [D]

9. Your dark line **MUST BE** within the box.
10. For each question, **ONLY ONE** box is to be marked in each set of four boxes.



This question paper consists of 7 printed pages



**TURNOVER**

Email: [pinpointpublishers21@gmail.com](mailto:pinpointpublishers21@gmail.com)

**KPSEA Revealed, 2022**  
507

**English Grade 6**

202501

**KPSEA REVEALED NATIONAL EXAMINATIONS**

**Question 1- 5**

Read the following dialogue and the answer question 1-5



- Jeff :** It looks like I could use another pair of hands. Brenda, would you help me with thge box?
- Brenda :** Sure, Good morning, Jeff you must be tired.
- Jeff :** I'm glad you came along. This is heavy!
- Brenda :** What's in it?
- Jeff:** My new computer. My uncle has just bought it for me.
- Brenda :** Great! Where do you want it to be placed?
- Jeff:** May be in my room. I need to use it immediately.
- Brenda :** Do you need my help to set it up?
- Jeff :** Thanks anyway, but I think I can manage. My uncle explained how to do it in great detail.
- Brenda:** Alright have a nice day.

- 
- |  |   |
|--|---|
| <p>1. When Brenda said "good morning", what should have Jeff said?</p> <p>A. Please hurry up I'm getting tired.<br/>B. Glad you came along.<br/>C. Good morning to you Brenda<br/>D. I am fine, Brenda</p> <p>2. Jeff does not great Brenda . This shows that Jeff is</p> <p>A. disciplined<br/>B. not polite<br/>C. confused<br/>D. lazy</p> <p>3. What shows that Brenda is well mannered?</p> <p>A. She helps Jeff<br/>B. Jeff greets Brenda<br/>C. She asks Jeff questions<br/>D. Jeff helps Brenda.</p> | <p>4. What should Jeff say after Brenda tells him, "have a nice day".</p> <p>A. Its okay<br/>B. See you later<br/>C. have a nice day too<br/>D. I didnt need your help.</p> <p>5. What should Jeff say when Brenda says, "you must be tired".</p> <p>A. I am not tired, I'm a man.<br/>B. Yes,I'm extremely tired.<br/>C. I will rest later in the day<br/>D. Ohh! Thank you.</p> |
|--|---|

**Read the below passage and then answer questions 6 - 10**

In the village of Mutel there was a girl called Dayone. She never obeyed her mother. She was punished everytime she behaved badly, but Dayone continued the same as always and didn't care about the consequences. Her mother loved her and did not want anything bad to happen to her That's why she always gave her advice.

One day, Dayone woke up very early. When her mother saw her, she told her to sit on a wooden chair. Dayone didn't want to, so her mother asked her to take another chair, but the rebellious girl said, "No".

She hastily sat on another chair which broke into pieces making her to fall down. Her mother looked at her and said, "I told you."

"See, dear daughter, I tell you to do things for your own good, because I love you so much. I warned you but you ignored me. To obey is good. Actually, it is good because I am showing you my love and you should show me yours. Nobody will like you if you are disobedient. If you keep behaving so badly, I will have to send you to another place to study, but there we won't be together. Neither of us would like that, so, think about what you are going to do. I hope you change.

The girl's eyes were filled with tears because she knew that living far away would be difficult. She felt sorry and promised her mother she would change and that she had deserved punishment due to her bad behaviour.

From that day, daughter and mother worked on good behaviour, better education and some human values that Dayone had to learn. They lived together always and were very happy.

6. From the first paragraph Dayone could best be said to be

- A. patient
- B. loving
- C. cunning
- D. disobedient.

7. At what time did Dayone wake up?

- A. Very late
- B. Very early
- C. During the day
- D. At night.

8. From the passage what did Dayone promise to do?

- A. She vowed to change
- B. She deserved punishment
- C. She promised to run away
- D. She wanted better education.

9. Why did Dayone's mother choose to talk to the young girl?

- A. She hated her daughter
- B. She wanted to send her away
- C. She loved the girl so much
- D. She was a rebellious girl.

10. Choose the **most** appropriate title for the above passage

- A. Dayone receives better education
- B. Dayone learns some human values
- C. Mother and daughter go separate ways
- D. The day the chair broke.

Read the question below and then answer questions 11 - 13

Gumboots are also known as rain boots or rubber boots.



They are highly useful, especially at any construction site, industrial area, chemical factory, mining industry, farm land or any other work place. They go along way to ensuring the safety of ones feet from falling objects which would otherwise cause an injury.

Wet and muddy places can be tricky to walk on because they are slippery. Gumboots lessen the risk of falls as they have specialised soles that are slip-resistant even in the most adverse condition. Because of their comfort, the wearer is productive even after working for long hours.

While someone is working with harsh substances like acids, chemicals etc, there are possibilities of getting burnt. Rubber safety footwear provides an effective barriers between feet and dangerous substances, hence eliminating the risk of burns.

Rain boots provides safety from cold, especially the ones which come with insulation system. They have the ability to keep the feet dry and safe. They are bona fied waterproof and one can even walk in a shallow srtream keeping the feet completely dry.

Now, if you want to keep your feet safe in the harsh conditions, then gumboots should be your best friend.

11. Why are gumboots highly useful to people?

- A. They are made from rubber
- B. They burn easily
- C. They can fit anyone.
- D. They offer safety to the feet

12. Why is it difficult to walk on wet or muddy ground?

- A. The ground is slippery
- B. Because of lack of gumboots
- C. Because of harsh weather
- D. The feet are too small.


13. Which one of the following is true according to the passage?

- A. Rain boots have an insulation system
- B. One can walk in deep streams barefooted.
- C. Gumboots make people less productive
- D. Acids and chemicals can burn rubber boots.

Read the passage below and then answer questions 14 and 15

Long time ago animals and birds spoke just like men do. When God had to stop them speaking, He made birds sing...lions to roar .... and hyenas to howl.

And do you blame God? Listen to what naughty hyena who had gone two days without meat did. He had been wandering up and down the hills when he suddenly stopped, nose in the air, one foot raised. Do I smell, ch.... smell food. He said, "Please God, let me find some food, even one rotting bone will do."



Slowly, he followed the smell, sniffing hard, stopping now and again. "Here at last," he said as he came in sight of a calf that seemed dead.

"God, no time to waste. Who knows the owner may be around still. I think some people tend to exaggerate, now who said that God is the giver of everything and that we should be grateful. Ok. Tell me, did

God give this calf? Did you God? I found it myself, smelled my way there. Nice calf too, rather thin but it will do. Here I go, where shall I start, this lovely neck? No, I know, I will start with the rope, then I'll get on the soft stuff."

After chewing half of the rope, The hyena brushed his teeth to increase his appetite. He stepped on the calf tail and 'snap' it went. The calf which was only very sick and tired, shot up and bolted away in the twinkling of an eye.

The hyena rubbed his eyes and soon fell down in hunger. He looked up again to the heaven, tried to speak but no words came. Animals have never been able to speak ever since....

14. From long ago what were animals and birds able to do?

- A. They were able to run
- B. They were able to talk to God
- C. They were able to speak
- D. They were able to eat each other

15. What lesson do we learn from the above story?

- A. Hyenas are dangerous animals
- B. It's good to be humble
- C. Eat meat first not the rope
- D. It's important to respect other animals

### Question 16 - 20

Read the passage below. It contains blank spaces 16 - 20. For each blank space, select the best alternative from the choices give.

Food is important for our body for a number of 16. It gives us the energy needed for play and doing day - to - day activities. It helps us to grow and makes our bones and muscles 17, even repairing damaged body cells. Besides, food also gives us satisfaction 18. There are some foods that are not healthy. Only those food items that contains nutrients 19 balanced proportions are healthy. People at all ages must be aware of the benefits of eating healthy food because it ensures a disease - free life for 20 years.

- |     |              |           |            |                 |
|-----|--------------|-----------|------------|-----------------|
| 16. | A. situation | B. limits | C. choices | D. reasons      |
| 17. | A. stronger  | B. weaker | C. bigger  | D. lesser       |
| 18. | A. but       | B. and    | C. when    | D. nevertheless |
| 19. | A. for       | B. in     | C. from    | D. of           |
| 20. | A. few       | B. little | C. many    | D. some         |

For question 21 and 22 complete the similes appropriately.

21. As slippery as \_\_\_\_\_
- A. wet grounds  
B. a monkey  
C. a kitten  
D. an eel.
22. As heavy as \_\_\_\_\_
- A. metal  
B. stone  
C. lead  
D. air.

In question 23, 24, 25 and 26 fill the blank space using the correct alternative from the choices given.

23. Benedict jumped \_\_\_\_\_ the pool while swimming.
- A. in  
B. on  
C. for  
D. into
24. The parents sat \_\_\_\_\_ the big mango tree during the meeting.
- A. on  
B. under  
C. with  
D. besides

25. We could not find enough firewood in the forest \_\_\_\_\_ ?

- A. could we
- B. could'nt we
- C. would we
- D. can we

26. \_\_\_\_\_ Rehema nor Abubakar wants to be left behind.

- A. Either
- B. Whoever
- C. Neither
- D. However

*Complete questions 27 and 28 using the correct relative pronoun.*

27. The teacher could not identify \_\_\_\_\_ bag had been left in class.

- A. who's
- B. what
- C. where
- D. whose.

28. This is the list of the items \_\_\_\_\_ all the learners should have.

- A. that
- B. which
- C. whom
- D. who

*For question 29, choose the alternative that completes the given proverb*

29. Prevention is better than \_\_\_\_\_

- A. medicine
- B. sorry
- C. injection
- D. cure

*For question 30, choose the word that means the same as the underlined.*

30. The priest left at dawn to catch his flight to Entebbe.

- A. twilight
- B. dusk
- C. daybreak
- D. midday

**THIS IS THE LAST PRINTED PAGE.**





Pinpoint Publishers  
Enriching your knowledge

# KPSEA REVEALED

Kenya Primary School Education Assessment

GREDI YA 6

202501

— KISWAHILI LUGHA — 2022

Muda:Saa 1

**MAAGIZO KWA WATAHANIWA (Soma maagizo yafuatayo kwa makini)**

- Umepewa kijitabu hiki cha kiswahili na karatasi ya kujibia. Kijitabu hiki kina maswali 30.
- Ukiisha chagua jibu lako, lionyeshe katika **KARATASI YA MAJIBU** na wala sio katika kijitabu hiki cha maswali.  
**JINSI YA KUTUMIA KARATASI YA MAJIBU**
- Tumia penseli ya kawaida.
- Hakikisha ya kwamba karatasi ya majibu uliyopewa imejumuisha yafuatayo:  
**NAMBAYAKO YA TATHMINI**  
**JINA LAKO**  
**JINA LA SHULE YAKO**  
**JINA LA SOMO**
- Usitie alama zozote nje ya visanduku.
- Iweke safi karatasi yako ya majibu na usiikunje.
- Kwa kila swali 1 - 30 umepewa majibu manne. Majibu hayo yameonyeshwa kwa herufi A, B, C, D. Ni jibu MOJA tu kati ya hayo manne ambalo ni sahihi. Chagua jibu sahihi.
- Kwenye karatasi ya majibu, jibu sahihi lionyeshe kwa kuchora kistari katika kisanduku chenye herufi uliyochagua kuwa ndilo jibu.

**Mfano**

**Katika kijitabu cha maswali**

28. Maneno katika jedwali hili yanastahili kuwa katika hali ya umoja pekee. Chagua jibu lenye maneno yasiyo katika hali ya umoja.

A	yai	dirisha	chandarua
B	uso	msusi	mwiko
C	ufagio	kiti	mswaki
D	kuni	vifutio	matunda

Jibu sahihi ni D

**Katika karatasi ya majibu:**

28 [A] [B] [C] [D]

- Chora kistari chako vizuri. Kistari chako kiwecheusi na kisijitokeze nje ya kisanduku.
- Kwa kila swali, chora kistari katika kisanduku kimoja tu kati ya visanduku vinne ulivyopewa.

**Pinpoint**

Kijitabu hiki cha maswali kina kurasa 8 zilizopigwa chapa.


Email: [pinpointpublishers21@gmail.com](mailto:pinpointpublishers21@gmail.com)



Swali la kwanza 1 hadi la 5

Soma mazungumzo yafuatayo kisha ujibu maswali.

(Juma amefika shuleni asubuhi)



- Juma : Shikamoo mwalimu?  
Bi Salama : Marhaba Juma. Habari za nyumbani?  
Juma : Nzuri tunamshukuru Maulana.  
Bi Salama : Mama anaendeleaje? Tulipata habari kuwa alijifungua.  
Juma : Anapata nafuu. Alijifungua pacha.  
Bi Salama : Aha! Hongera kwake. (*akitabasamu*)  
Juma : Tumehongera.

Bi Salama : (*Kwa mazingatio*) Itakubidi utafute usaidizi kwa wenzako kufidia masomo waliosoma ukiwa nyumbani ili uwe sawa nao.

Juma : Nitafanya hivyo mwalimu. Bila shaka.

Bi Salama : Haya nenda darasani.

Juma : (*Akiondoka*) Asante sana. Siku njema mwalimu.

Bi Salama : Nawe pia. (*anaelekea ofisini*)

- |  |  |
|--|--|
| 1. Shikamoo ni salamu za ?<br><br>A. Asubuhi pekee<br>B. Shuleni baina ya walimu na wanafunzi<br>C. Wadogo kwa walio na umri mkubwa<br>D. Wanafunzi kwa walimu wao | 3. Ni neno lipi linadhihirisha kushangaa kwa Bi. Salama?<br><br>A. Marhaba<br>B. Habari za nyumbani<br>C. Nawe pia<br>D. Aha!  |
| 2. Badala ya kusema mama alijifungua, tunaweza kutumia nahau gani?<br><br>A. pata jiko<br>B. pata salama<br>C. pata shufaa<br>D. pata uja uzito.                   | 4. Kati ya majina haya lipi si kisawe cha Maulana?<br><br>A. Mola<br>B. Jalali<br>C. Bwana<br>D. Rabuka  |
|  | 5. Kutokana na mazungumzo haya. Kuna uwezekano kuwa Juma.<br><br>A. alikuwa amezaliwa na pacha wake<br>B. alikuwa mgonjwa<br>C. alikosa vipindi fulani vya masomo<br>D. alitaka kupewa nafasi akapumzike |

Soma kifungu kifuatacho kisha ujibu maswali.



Shule yetu ya Bidii inajulikana nchini kote. Sifa zake zimeenea kote kama moto kwenye kichaka kikavu msimu wa kiangazi. Wanafunzi wa shule hii wametia fora katika nyanja anuwai; si michezo, si masomo, si nidhamu si kutunza mazingira.

Wanafunzi wa shule yetu wanaelewa dhahiri shahiri madhara ya dawa za kulevya. Hivyo basi, mihadarati kama vile bangi, pombe, sigara na kokeini kwao ni mwiko. Wanajua kuwa kila mchezea wembe hujikata vyanda vyake. Wanathamini nidhamu kwa hali na mali. Wanaongozwa na methali kuwa heshima si utumwa. Wao huwajibika masomo yao vilivyo na kutumia muda wa mapumziko kwa kujipumzisha na kukuza talanta zao.

Siri kubwa inayoifanya shule yetu kung'aa kama nyota angani ni nasaha na ushirikiano kati ya walimu, wanafunzi na wazazi. Ushirikiano huu wa kinu na mchi umaiwezesha shule yetu kupiga hatua na kupokea tuzo kemkem kitaifa. Ama kweli, bidii hulipa na kidole kimoja hakimvunji chawa.

6. Kwa mujibu ya aya ya kwanza

- A. shule ya Bidii inasifika kimataifa katika masomo
- B. sifa za shule ya Bidii zilitokana na masomo pekee.
- C. shule ya Bidii haishiriki katika nyanja anuwai.
- D. sifa za shule ya Bidii zinatokana na maendeleo yake anuwai.

7. Ni nini maana ya kauli, "mihadarati kwao ni mwiko"?

- A. anasa
- B. marufuku
- C. hatari
- D. samani

8. Tunaweza kujifunza nini katika aya ya mwisho?

- A. Mihadarati inaweza kutuletea madhara mabaya.
- B. Tutumie muda wa mapumziko kukuza talata.
- C. Bidii na ushirikiano huleta ufanisi katika jambo.
- D. Sifa nyingi huja baada ya kuepuka mihadarati.

Swali la 9 hadi la 12

Soma mazungumzo yafuatayo kisha ujibu maswali.



Waridi : (Akimpa mkono Toni) Sabalheri kaka?

Toni : Aheri dada. Naona umeshavaa jezi yako.

Kweli, leo ni leo asemaye kesho ni mwongo.

Waridi : Leo asiyekuwa na mwana aeleke jiwe.

Lazima tushinde mechi hii.

Toni : Kumbuka wewe ndiwe mshambulizi tunayetegemea.

Waridi : Nitasahau vipi? (huku akionyesha nambari kwenye jezi) Nambari tisa mwenyewe!

Toni : Lazima ushirikiane na wenzako kutafuta ushindi. Pia uwe jasiri, usikubali kudhibitiwa na walinzi wao. Fanya juu chini kuwazidi maarifa.

Waridi : Nitatumia wepesi wangu kuwapiga chenga na kufyatuka kwenda kufunga mabao .

Toni : Mimi nitaongoza kikosi cha kuishangilia timu yetu. Shime! Nakutakia kila la heri

Waridi. (anampa mkono)

Waridi : Nakuahidi ushindi kaka. Asante( kila mmoja anaondoka)

9. Waridi na Toni walikutana wakati gani?

- A. Adhuhuri
- B. Mchana
- C. Alasiri
- D. Asubuhi

10. Ni wazi kuwa waridi alikuwa na imani kubwa ya kupata


- A. ushinde
- B. ushindi
- C. mbao
- D. shangwe.

11. Ni nini ambacho Waridi angetumia kwenda kufunga mabao?

- A. Ujuzi
- B. Chenga
- C. Wembamba
- D. Wepesi

12. "Shime!" Kama ilivyotumiwa, ni neno la?

- A. kuonyesha maagano
- B. kutia Moyo
- C. kushukuru
- D. kuzua mzaha.



Juzi Jumapili tulienda sokoni na wavyele wangu kununua lebasi za sherehe ya harusi ya shangazi. Kesho tutaenda tena sokoni kununua bidhaa za mapishi. Mama anahitaji viungo vya mapishi kama vile iliki, hoho, mdalasini, kitunguu saumu, tomato na dania. Mama amewaalika marafiki zake mtondo waje kumpa mkono katika maandalizi hayo. Siku moja kabla ya siku ya siku, tutapamba sehemu ya dhifa kwa maasumini ya maua, vibofu vya kupendeza na mapambo aina aina.

13. Iwapo Jumapili ilikuwa juzi, leo ni?

- A. Alhamisi
- B. Jumatatu
- C. Ijumaa
- D. Jumanne.

14. Lebasi ni kisawe cha

- A. vyakula
- B. mavazi
- C. viungo
- D. peremende.

15. Yaelekea harusi itafanyika lini

- A. Ijumaa
- B. hatujaambiwa
- C. Jumamosi
- D. Jumapili.

Swali la 16 hadi la 20

Soma kifungu hiki kwa makini. Kwa kila swali kuna majibu manne. Chagua jibu bora zaidi kati ya yale uliyopewa.

\_\_16\_\_ ya mjomba kuwasili nyumbani, tulimkaribisha \_\_17\_\_. Mama alimpa maji baridi ili akate kiu \_\_18\_\_. Aliketi kwenye kochi huku \_\_19\_\_ na baba. Alikuwa amekawia \_\_20\_\_.

- |     |                   |                   |                   |                    |
|-----|-------------------|-------------------|-------------------|--------------------|
| 16. | A. Kabla          | B. Kando          | C. Sababu         | D. Baada           |
| 17. | A. chumbani       | B. sebuleni       | C. jikoni         | D. hamamuni        |
| 18. | A. yake           | B. chake          | C. yao            | D. zake            |
| 19. | A. wakipiga kamsa | B. wakipiga miayo | C. wakipiga gumzo | D. wakipiga hoihoi |
| 20. | A. kutembea       | B. kutembezwa     | C. kutembelewa    | D. kututembelea    |

Swali la 21 hadi la 30

21. Neno "sahani" lina silabi ngapi?

- A. 6
- B. 3
- C. 4
- D. 2

22. Chagua kundi la nomino pekee.

- A. kuimba, hasira, maji.
- B. shuleni, pole pole, jana
- C. safi, yoyote, wale
- D. ilhali, maadamu, bora

23. Maneno yapi yaliyo katika ngeli ya "U-ZI" pekee?

- A. mkate, ukuta, unga
- B. uzi, ufagio, wino
- C. ubinda, wenzo, ulimi
- D. ukucha, uwanja, ugali

24. Ni sentensi ipi iliyo katika hali timilifu?

- A. Mjomba alitutembelea wiki iliyopita.
- B. Gari lao litarekebishwa magurudumu baadaye.
- C. Wezi wale wametiwa mbaroni.
- D. Mvua hunyesha kila wakati.

25. Kanusha. Akichaguliwa ataongoza kwa uadilifu.

- A. Akichaguliwa hataongoza kwa uadilifu.
- B. Asipochaguliwa ataongoza kwa uadilifu.
- C. Hangechaguliwa hangeongoza kwa uadilifu.
- D. Asipo chaguliwa hataongoza kwa uadilifu.

26. Ni sentensi ipi iliyotumia kiunganishi kwa usahihi?

- A. Maria alisoma kwa bidii ilhali amepita mtihani.
- B. Tulitembea hadi Emali kwa miguu.
- C. Amenunua gari madhali baiskeli?
- D. Alituita bali hatukuitikia.

27. Chagua sentensi sahihi kisarufi.

- A. Kiprop ni mrefu kumliko Kirui.
- B. Asingeimba vyema asingalituzwa.
- C. Vazi zuri hupendeza.
- D. Panya ameingia shimoni pale.

28. Upi ni udogo wa: Mbuzi huyu anaelekea mjini?

- A. Mbuzi hiki kinaelekea kijijini.
- B. Kimbuzi hiki kinaelekea mjini.
- C. Buzi hili linaelekea jijini.
- D. Kibuzi hiki kinaelekea kijijini.

29. Kinyume cha kutabasamu ni

- A. kucheka
- B. kunua
- C. kulia
- D. kukasirika

30. Maneno haya yamepangwa kwa mfuatano upi katika kamusi?

- i) joho
- ii) johari
- iii) jongoo
- iv) jongomeo

- A. (ii), (i), (iv), (iii)
- B. (iii), (iv), (i), (ii)
- C. (i), (iv), (iii), (ii)
- D. (ii), (iv), (i), (iii)

**HUU NDIO UKURASA WA MWISHO ULIOPIGWA CHAPA**



# KPSEA REVEALED

Pinpoint Publishers KENYA PRIMARY SCHOOL EDUCATION ASSESSMENT  
Enriching your knowledge

GRADE 6

202503

**MATHEMATICS — 2022**

2hours

### READ THESE INSTRUCTIONS CAREFULLY

1. You have been given this question booklet and a separate answer sheet. The question paper contains 30 questions.
2. Do any necessary rough work in this paper.
3. When you have chosen your answer, mark it on the ANSWER SHEET, not in this question paper.

### HOW TO USE THE ANSWER SHEET

4. Use an ordinary pencil only.
5. Confirm that the answersheet you have been provided with has the following:  
 YOUR ASSESMENT NUMBER  
 YOUR NAME  
 NAME OF YOUR SCHOOL  
 NAME OF SUBJECT
6. Do not make any marks outside the boxes.
7. Keep the sheet as clean as possible and do not fold it.
8. For each Questions 1 - 30, four choices are given. The choices are lettered A, B, C and D in each case only ONE of the four answers is correct. Choose the correct answer from the choice.
9. On the answer sheet, the correct answer is to be shown by drawing a dark line inside the box in which the letter you have chosen is written.

#### Example

In the question booklet:

19. Work out  $2 \times 18 + 7$   
 A. 252  
 B. 50  
 C. 43  
 D. 27

The correct answer is C (43).

On the Answer Sheet:

[A] [B]  [C] [D]

In the set of boxes numbered 19, draw a dark line inside the box in which the letter you have chosen is written.

10. Your dark line MUST be within the box.
11. For each question, ONLY ONE box is to be marked in each set of four boxes.

Pinpoint

This question paper consists of 8 printed pages

Email: [pinpointpublishers10@gmail.com](mailto:pinpointpublishers10@gmail.com)

202503

K C P E Revealed, 2022  
503



TURN OVER

Mathematics Grade 6

KPSEA REVEALED NATIONAL EXAMINATIONS



1. A learner had four hundred and eighteen thousand, two hundred and six sheep. What is the number of sheep written in symbols?
- A. 4018206  
B. 401826  
C. 418206  
D. 41826
2. A school has 1843 pupils. Each pupil received 14 exercise books. How many books were supplied in the whole school?
- A. 25802  
B. 1857  
C. 1829  
D. 24802
3. During the rainy season, pupils at Njabini planted 47632 trees on the first day and 6240 trees on the second day. How many trees did they plant altogether?
- A. 41392  
B. 43872  
C. 53972  
D. 53872
4. What is the difference of the largest number and smallest number formed by the following digits - 6, 2, 7, 9, 4,
- A. 122321  
B. 13068  
C. 72963  
D. 97642
5. A factory manufactured 84639 packets of biscuits in one hour. How many pieces were manufactured to the nearest thousand?
- A. 84600  
B. 84000  
C. 85639  
D. 85000
6. The area of a square piece of land is  $256\text{m}^2$ . What is the measure of one side?
- A. 64m  
B. 16m  
C. 65536m  
D. 1024m
7. In a bus station, there were 1248 people who wanted to travel. How many 52 bus-seater would ferry all the passengers?
- A. 1300  
B. 204  
C. 24  
D. 25

8. Arrange the following fractions from the smallest to the largest.

$$\frac{3}{4}, \frac{1}{2}, \frac{2}{5}, \frac{1}{6}$$

A.  $\frac{3}{4}, \frac{1}{2}, \frac{2}{5}, \frac{1}{6}$

B.  $\frac{1}{6}, \frac{2}{5}, \frac{1}{2}, \frac{3}{4}$

C.  $\frac{1}{2}, \frac{3}{4}, \frac{2}{5}, \frac{1}{6}$

D.  $\frac{1}{6}, \frac{1}{2}, \frac{2}{5}, \frac{3}{4}$

9. Mary ate 0.45 of a cake while Rosa ate 0.2. What fraction of the cake did they eat altogether?

A. 0.65

B. 0.47

C. 2.45

D. 0.25

10. Wairimu went to fetch water from a river a distance of 2km 300m. What distance did she cover to and from the river in metres?

A. 4km 600m

B. 4600m

C. 4.6km

D. 10km

11. Work out

Km	m
5	87

x	6
---	---

---



---

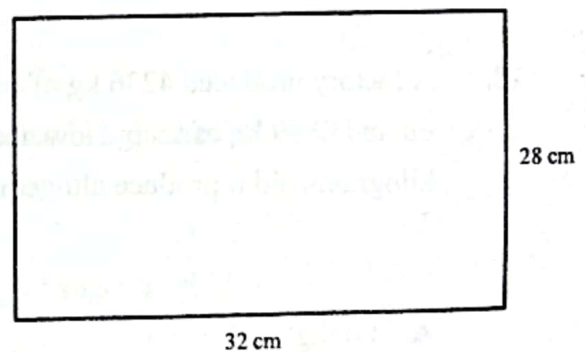
A. 35 km 22m

B. 30km 482m

C. 30km 522m

D. 34km 82m

12. What is the area of the figure below?



A. 896cm

B. 120cm<sup>2</sup>

C. 120cm

D. 896cm<sup>2</sup>

13. What is the volume of carton which measures 7cm by 5cm by 12 cm

- A.  $24\text{cm}^3$
- B.  $35\text{cm}^3$
- C.  $480\text{cm}^3$
- D.  $480\text{cm}^3$

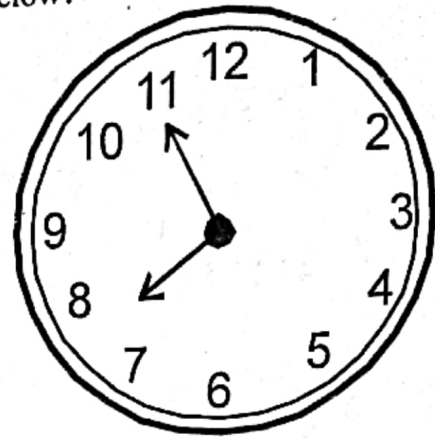
14. Maria sold 500ml of milk in a day .How much milk did she sell in litres?

- A. 5L
- B. 50L
- C. 0.5L
- D. 500L

15. A factory produced 4236 kg of cooking oil and 2869 kg of soap. How many kilograms did it produce altogether?

- A. 7005kg
- B. 7105kg
- C. 6105kg
- D. 1367kg

16. What is the time shown in the clock face below?



- A. Eleven minutes past eight o'clock
- B. Eleven minutes to eight o'clock
- C. Eight minutes to elen o'clock
- D. Five minutes to eight o'clock.

17. Omolo gannered 436897 votes in his county. What is the place value of digit 6 in the number?

- A. Hundreds
- B. Tens of thousands
- C. Thousands
- D. 6000

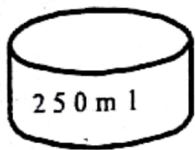
18. Change  $3\frac{1}{4}$  to improper fraction.

- A.  $\frac{4}{13}$
- B.  $\frac{13}{4}$
- C.  $\frac{31}{4}$
- D.  $\frac{4}{31}$

19. Mohamed earns sh. 35680 every month. He pays sh. 2350 as tax and spends sh. 23430 for house rent and food and saves the rest. How much does he save?

A. Sh. 10,100  
B. Sh. 33,330  
C. Sh. 12,250  
D. Sh. 9,900

20. How many 250 ml containers can fill a 5l container?



21. During an exam, a Mathematics paper takes 1 hour 40 minutes while a Science paper takes 1 hour 20 minutes. How much longer does a Maths paper take than a Science paper?

A. 3 hours  
B. 20 minutes  
C. 1hr 20 min  
D. 1hour

22. Which one of the following services is not provided by a bank?

A. Giving loans  
B. Depositing money  
C. Teaching people  
D. Saving money

23. Find the value of y in

$$4y + 6 = 30$$

A. 24  
B. 3  
C. 9  
D. 6

24. Nyakio bought the following items from a shop.

2kg of sugar @ sh. 100

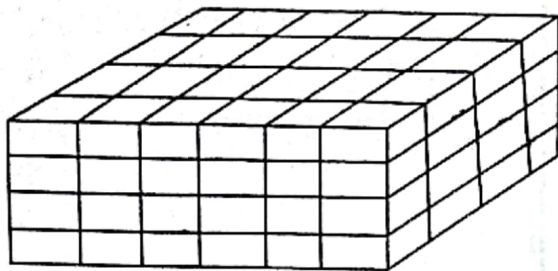
3packets of milk @ sh 60

1 loaf of bread @ sh. 60

How much money did she pay for the items?

A. Sh. 440  
B. Sh. 220  
C. Sh. 320  
D. Sh 340

25. How many cubes are in the stack below?



- A. 58
- B. 16
- C. 32
- D. 96

26. Work out

sh	cts
3 2 5	4 0
- 1 5 0	8 0

- A. sh. 175    60 ct
- B. sh. 174    60 cts
- C. sh. 175    20 cts
- D. sh. 476    20 cts

27. Michael worked for 2 hours 30 minutes in the morning and 1 hour 20 minutes in the afternoon. For how long did he work?

- A. 3h 50min
- B. 1hr 10mins
- C. 4hrs
- D. 2hrs 50mins

28. What is the name of the angle below



- A. Right angle
- B. Reflex angle
- C. Obtuse angle
- D. Acute angle

29. How many  $\frac{1}{4}$  kg packets can be obtained from 2kg?

- A. 8
- B.  $\frac{1}{2}$
- C. 4
- D. 16

30. The following table shows the number of fruit trees planted by Grade 6 pupils during a rainy season. Use it to answer the question that follow.

Type of tree	Tally	Number
Avocado	HHH HHH HHH	16
Orange	HHH	8
Citrus		5
Pawpaw	HHH HHH	_____

How many fruit trees did they plant altogether?

- A. 29
- B. 31
- C. 41
- D. 33

*Pinpoint*



**Pinpoint Publishers**  
Enriching your knowledge

# KPSEA REVEALED

Kenya Primary School Education Assessment

GRADE SIX

202507

— INTEGRATED SCIENCE — 2022

1hr 40mins

**INSTRUCTIONS TO CANDIDATES (Please read these instructions carefully)**

1. You have been given this question booklet and a separate answer sheet. The question booklet contains 50 questions
2. Do any necessary rough work in this booklet.
3. When you have chosen your answer, mark it on the ANSWER SHEET, not in this question booklet.

**HOW TO USE THE ANSWER SHEET**

4. Use an ordinary pencil.
5. Confirm that the answer sheet provided with has the following:  
YOUR ASSESSMENT NUMBER  
YOUR NAME  
NAME OF YOUR SCHOOL  
NAME OF SUBJECT
6. Do not make any marks outside the boxes.
7. Keep the answer sheet as clean as possible and do not fold it.
8. For each of the questions 1 - 50, four choices are given. The answers are lettered A, B, C and D. In each case, only ONE of the four choices is correct. Choose the correct answer from the choices.
9. On the answer sheet, the correct answer is to shown by drawing a dark line inside the box in which the letter you have chosen is written.

**Example**

**In the Question booklet**

11. John and Peter observed a mango fruit falling from a mango tree. John told Peter that the mango fell because of

- A. high temperature
- B. force of gravity
- C. its small mass
- D. its high motion

The correct answer is B

**On the answer sheet.**

In the set of boxes numbered 11, draw a dark line inside the box with the letter B printed in it as indicated below.



[A] [B] [C] [D]

10. Your dark line MUST be within the box.
11. For each question, ONLY ONE box is to be marked in each set of four boxes.



This question paper consists of 7 printed pages



TURN OVER

202507

Email: [pinpointpublishers21@gmail.com](mailto:pinpointpublishers21@gmail.com)

KPSEA Revealed, 2022 INTEGRATED SCIENCE Grade 6

KPSEA REVEALED NATIONAL EXAMINATIONS

1. During a nature walk, learners observed plant remove gum and fall it's leaves. What charateristic of plants did it demonstarte?

- A. Reproduce.
- B. Remove waste.
- C. Feed.
- D. Grow.

2. Which of the following parts of the digestive system stores undigested food for a short while?

- A. Colon
- B. Rectum
- C. Ileum
- D. Stomach.

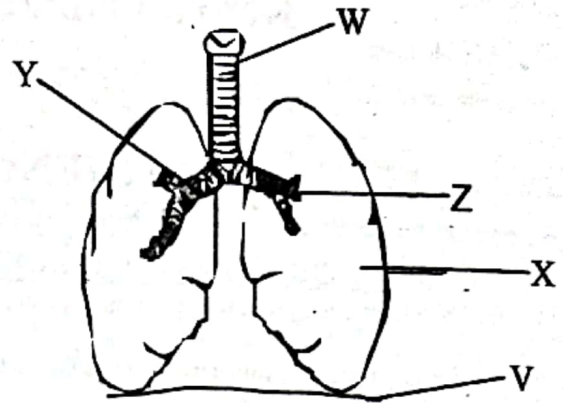
3. Which part of the human skeleton protects the lungs and the heart?

- A. Ribcage.
- B. Skull.
- C. Backbone.
- D. Forelimb.

4. Which of the following sense organs is not matched with it's function?

Sense Organ	Function
A. Eye	Light sensation
B. Nose	Smell
C. Skin	Touch
D. Ear	Heat reception

5. The diagram below represents some parts of the human breathing system.



Which of the following labelled parts controls the movement of air in and out of the lungs

- A. Z
- B. Y
- C. V
- D. W

6. Which one of the following is not an effect of air pollution?

- A. Breathing problems.
- B. Poor visibility.
- C. Irritation on the eyes .
- D. Healthy lungs.

7. Which of the following is not a characteristic of clean water

- A. bad smell.
- B. no taste.
- C. it is colourless.
- D. has no smell.



8. Grade 4 pupils were sweeping a dusty compound. Which one of the following is not a precautionary safety measure should they take?

- A. Wear gloves.
- B. Cover your eyes only.
- C. Wear dust masks.
- D. Sprinkle water before sweeping.

9. What is the function of C.P.U as a part of computer?

- A. It processes information put in a computer.
- B. Converts information from a computer into paper form.
- C. Used to key in information from the monitor.
- D. Takes images from mbooks, magazine pages and posters.

10. Which one of the following words can be formed from the puzzle below

M	X	W	P	M
S	O	N	C	Q
B	T	U	G	K
A	H	J	S	D
F	R	V	I	E

- A. Computer
- B. Data
- C. Mouse
- D. Monitor.

11. Which one of the following is the odd one out?

- A. water
- B. milk
- C. juice
- D. water vapour.

12. Class four pupils went for a swimming lesson. Their teacher asked them to carry floaters they could get. Which of the following was least needed?

- A. Tyre tube.
- B. Jerrycan.
- C. Old car tyre.
- D. Swimming costume.

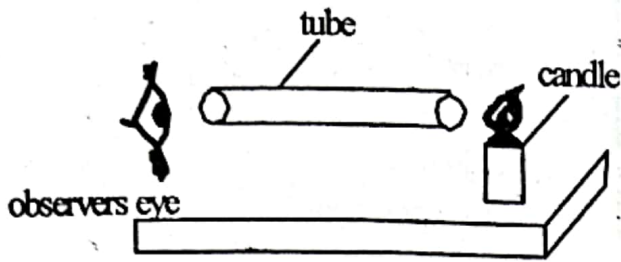
13. A grade 4 pupil kicked a ball rested on the ground as shown below;



What effect of force was being demonstrated?

- A. Force stops a moving object.
- B. Force changes the shape of an object
- C. Force starts motion.
- D. Force changes direction of a moving object.

14. Study the diagram below.



Which property of light is being investigated in the diagram below.

- A. Light travels on a straight line.
- B. Light travels in all direction.
- C. Light travels fast in tubes
- D. Light travels faster than sound.

15. Which one of the following levers has the effort between the Load and the fulcrum.

- A. Wheel barrow.
- B. Spade.
- C. Claw hammer.
- D. Seasaw.

16. Water is used in different ways in our community. Which of these is an industrial use of water?

- A. irrigation.
- B. surfing.
- C. generating power.
- D. rearing fish.

17. Loam soil is the best soil for growing crops. Why do you think a farmer growing rice prefer to use clay soil

- A. clay soil is sticky.
- B. clay soil cracks when dry.
- C. clay soil has more nutrients.
- D. clay soil has poor drainage.

18. Name a common product that is produced by both sheep and goat.

- A. wool
- B. mutton
- C. mohair
- D. milk

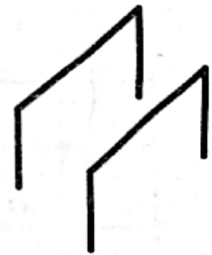
19. Why is drip irrigation method better than the use of a sprinkler

- A. Uses water sparingly.
- B. A lot of water is used.
- C. The rate of evaporation is high.
- D. Used water can be re-used.

20. Name an indigenous root grown in Kenya

- A. cowpeas.
- B. maize.
- C. sorghum.
- D. cocoyam.

Use the diagrams below to answer question 21-24.



21. Why do you think the farmer covered the base of the young plant with dry grass?

To

- A. preserves nutrients.
- B. increase soil erosion
- C. reduce evaporation.
- D. increase production.

22. Suggest other two methods the farmer would use to control the unwanted plants in the farm.

- A. digging out and grafting
- B. weeding and mulching.
- C. cover cropping and uprooting.
- D. digging out and use of herbicides.

23. What is the importance of shade in figure 1.5?

- A. Prevent water from reaching the seedling.
- B. Prevent too much heat and water loss.
- C. Provide nutrients to the young plants.
- D. Improve production of the seedlings

24. Kiprono a grade 5 pupil wondered why the farmer removed the shade after some time and also reduced the amount of water. What explanation would the farmer give to Kiprono?

- A. To increase the rate of growth of the seedling.
- B. To control weeds.
- C. To harden off the seedlings ready for transplant.
- D. To reduce moisture.

25. Which one of the following is **not** a nursery management practice.

- A. Watering seeds.
- B. Harvesting.
- C. Removing excess seedling.
- D. Weeding.

26. Which stitch is used to repair a gaping seam?

- A. Double stitch
- B. Satin stitch
- C. Bach stitch
- D. Stem stitch.

27. The following are reasons why clothes should be repaired whenever they get damaged. Which one is **not**?

- A. To make them last long
- B. To make them clean
- C. To save money
- D. To look decent.

28. Grade 4 pupils from Elimu School were discussing reasons for cooking food. Which of the following was the **least** reason given?

- A. To add quantity.
- B. To make it digestable.
- C. To add value
- D. To add taste.

29. Below are changes during a dolescence period.

- i) *increase in weight and height.*
- ii) *growth of air under arms.*
- iii) *waist and hips broaden.*
- iv) *some girls show signs of breast development.*
- v) *chest and shoulders broaden.*

Which of the changes only appear in girls?

- A. (i), (iv), (v)
- B. (ii), (iii), (i)
- C. (i), (iv), (ii)
- D. (ii), (iii), (iv)

30. Cosmetics when misused can cause the following dangers **except**.
- A. heart problems
  - B. irritation on the skin
  - C. fire
  - D. eye infection.
31. Omula's brother wets the bed besides being old now. What could be the reason for that?
- A. He fears going out alone.
  - B. He is just lazy
  - C. He drinks a lot of water before going to bed.
  - D. He dreams a lot.
32. Shoes should always be stuffed before storing. Which of the following does not show why this act is encourage?
- A. to make them look smart.
  - B. to maintain shape
  - C. to keep away dangerous pests.
  - D. to last longer.
33. Mr. Momanyi asked his class to give the importance of buttoning up a shirt before hanging. Four boys gave their answers as below.
- Mark** - to avoid crises.  
**Mathew** - to avoid falling.  
**John** - to take a small space.  
**Luke** - to dry well.
- Which of the boys was incorrect?
- A. Mathew
  - B. Luke
  - C. John
  - D. Mark.
34. Which of the following diseases is a malnutritional disease?
- A. Malaria
  - B. Typhoid
  - C. Epilepsy
  - D. Marasmus.
35. Dry fat frying is a method of cooking food. Which of these foods can **not** be prepared by using of this method?
- A. Pork
  - B. Beef
  - C. Termites
  - D. Groundnuts
36. Learners were asked to match various equipmnet with the games and sports they are used to play.
- i) baton - relay
  - ii) stocking - soccer
  - iii) bat - soft ball
  - iv) net rugby
- Which of the above was in correctly matched.
- A. (i)
  - B. (ii)
  - C. (iii)
  - D. (iv)
37. How many players are their in a soccort match?
- A. 11
  - B. 14
  - C. 22
  - D. 7
38. Which pass can be performed by using any part of the body below the trunk?
- A. Instep pass
  - B. Overhead pass
  - C. Over arm pass.
  - D. Chest pass
39. Otieno wanted to improvise a ball. Which of these materials did he **not** collect?
- A. Rags
  - B. Old paper bags
  - C. Ropes
  - D. Bicycle pump.

40. How many points is awarded to both teams in case of a draw in the game of soccer?

- A. 0
- B. 1
- C. 3
- D. 2

41. A grade 4 pupil performed a T-balance. Which part of the body supported him?

- A. Head.
- B. Left foot.
- C. Both feet.
- D. Arms.

42. When should first aid be administered?

- A. Immediately after the accident.
- B. A few minutes after the accident.
- C. At the hospital
- D. After seeing the doctor.

43. Which of the following is **not** a content of a first aid kit?

- A. Pain killers
- B. Bandage
- C. Razor blade
- D. Gloves.

44. A P.E teacher was encouraging his class to be training before taking part in a competition. They then listed reasons for this. Which was least mentioned?

- A. to win the game
- B. to avoid fatigue
- C. to improve agility
- D. to be fit.

45. Which is the best resting position?

- A. Sitting
- B. Lying on the back
- C. Lying on the left side.
- D. Lying on the right side.

46. In a competition, some drugs are highly discouraged. Which is **not**?

- A. Wine
- B. Bhang
- C. Painkiller
- D. Alcohol.

47. Agility is the ability of the body to perform numerous activities with fatigue. Which one is a way of achieving this?

- A. Sit ups
- B. Balance
- C. Runs.
- D. Balance diet.

Use the picture to answer 48 and 49.



48. Which technique is shown in the picture above?

- A. Drop - finish.
- B. Run through.
- C. Shoulder shag.
- D. Bullet finish.

49. Which safety precaution should be taken when performing the above finish?

- A. Change lane.
- B. Do not jump
- C. Maintain the lane.
- D. Block your opponent.

50. In a relay, which material can **not** be used to improvise a batton?

- A. Manilla
- B. Plastic pipe.
- C. Stick
- D. Iron metal.



Pinpoint Publishers  
Enriching your knowledge

# KPSEA REVEALED

Kenya Primary School Education Assessment 202506

## GRADE SIX

— CREATIVE ARTS & SOCIAL STUDIES — 2022

1hr 40mins

### INSTRUCTIONS TO CANDIDATES (Please read these instructions carefully)

1. You have been given this question booklet and a separate answer sheet. The question booklet contains 50 questions divided into two parts: **Part I** and **Part II**. Answer all the questions in part I. In part II there are three sections Choose the section that you have prepared for and answer all the questions.
2. Do any necessary rough work in this booklet.
3. When you have chosen your answer, mark it on the **ANSWER SHEET**, not in this question paper.

### HOW TO USE THE ANSWER SHEET

4. Use an ordinary pencil only.
5. Confirm that the answer sheet that you have been provided with has the following:  
YOUR ASSESSMENT NUMBER  
YOUR NAME  
NAME OF YOUR SCHOOL  
NAME OF THE SUBJECT
6. Do not make any marks outside the boxes
7. Keep the sheet as clean as possible and do not fold it
8. For each Questions 1 - 50, four answers are given. The answers are lettered **A, B, C, D**. In each case, only **ONE** of the four choices is correct. Choose the correct answer from the choices.
9. On the answer sheet show the correct answer by drawing a **dark line** inside the box in which the letter you have chosen is written.

### Example

#### In the question booklet

23. One way in which your school can collaborate with the neighbouring community is by
- |                           |   |
|---------------------------|---|
| A. producing good results | B. cleaning the market in the neighbourhood |
| C. maintaining discipline | D. planting of trees in the school compound |

The correct answer is "B"

#### On the answer sheet.

In the set of boxes numbered 23, draw a dark line inside the box with the letter B printed in it as indicated below.

[A]  [B]  [C]  [D]

In the set of boxes numbered 11, the box with letter A printed in it is marked

10. Your dark line **MUST BE** within the box.
11. For each question, **ONLY ONE** box is to be marked in each set of four boxes.

Pinpoint

This question paper consists of 12 printed pages

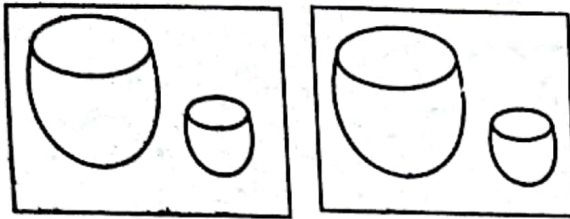
Email: [pinpointpublishers21@gmail.com](mailto:pinpointpublishers21@gmail.com)



TURN OVER

**PART 1: CREATIVE ARTS**  
**SECTION A: ART AND CRAFT**

1. Juma was composing two pictures as shown below. Which principle of art was he looking at?



- A. Proportion of forms  
B. Balance of forms  
C. Rythm and movement  
D. Value
2. Which of the following materials is not used in carving?  
A. Razor blade  
B. Chisels  
C. Axe  
D. Panga
3. The sharpness or clarity of image in a photograh is  
A. background  
B. lighting  
C. view point  
D. focus quality
4. Gloria a grade four pupil at Hekima Primary School made a composition from cutting and posting pictures from different places. Which composition was he making?  
A. Mounting surface  
B. Collage  
C. Montage  
D. Carving

5. Stipping technique is used in shading pictures. In this technique we use?



- A. Shading to differentiate light and dark  
B. Using dots to create light and dark effect  
C. Lines to differentiate light and dark  
D. All the above to differentiate light and dark
6. A pupil saw the following picture. Which element of art was being investigated



- A. value effect  
B. balance of form effect  
C. line effect  
D. smudge technique.
7. Which of the following is not a technique used in basketry  
A. twining  
B. coil and stitch  
C. plaiting  
D. dyeing.

8. While making a wax crayon, why is the melting of the wax done under controlled temperatures?

- A. To avoid contact of wax crayon with water
- B. To avoid dilution of wax crayon with water
- C. So the wax crayon can be purely extracted
- D. To enable the wax crayon to dry

9. In the absence of the black indian ink, which of the following can be suitably used

- A. charcoal
- B. black wax crayon
- C. chalk
- D. pencil

10. The picture below is a pot made made and decorated through



- A. coiling and incising
- B. coiling and embedding
- C. coiling and stamping
- D. coiling and thonging.

## SECTION B: MUSIC

11. All the following countries belong to the East Africa Community except

- A. DRC
- B. Burundi
- C. Rwanda
- D. Ethiopia.

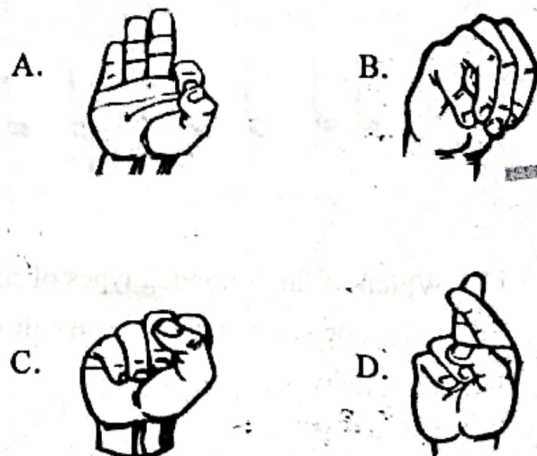
12. Which of the following consists of percussion instrument only

- A. drum and horn
- B. guitar and horn
- C. guitar and maracas
- D. keyboard and nylophone

13. Which of the following materials consist of those that are needed to make a shaker

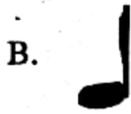

- A. rod, strings and skin
- B. Y-stick, thread, bottle tops and nail
- C. hollow wood, stick and nail
- D. animal skin, y-shick, bottle and nail

14. Which of the following solfa hand sign has the highest pitch in comparison to the others





15. Which of the following is the longest note symbol.



16. Which of the following represent Ta-te Taa Tate taa taa taa Taa aa



17. Which of the following types of songs would be sung in a slow and soft voice

- A. lullaby
- B. topical
- C. singing game
- D. action song.

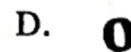

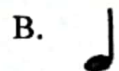
18. The speed of a song is referred to as

- A. dynamics
- B. structure
- C. pitch
- D. tempo

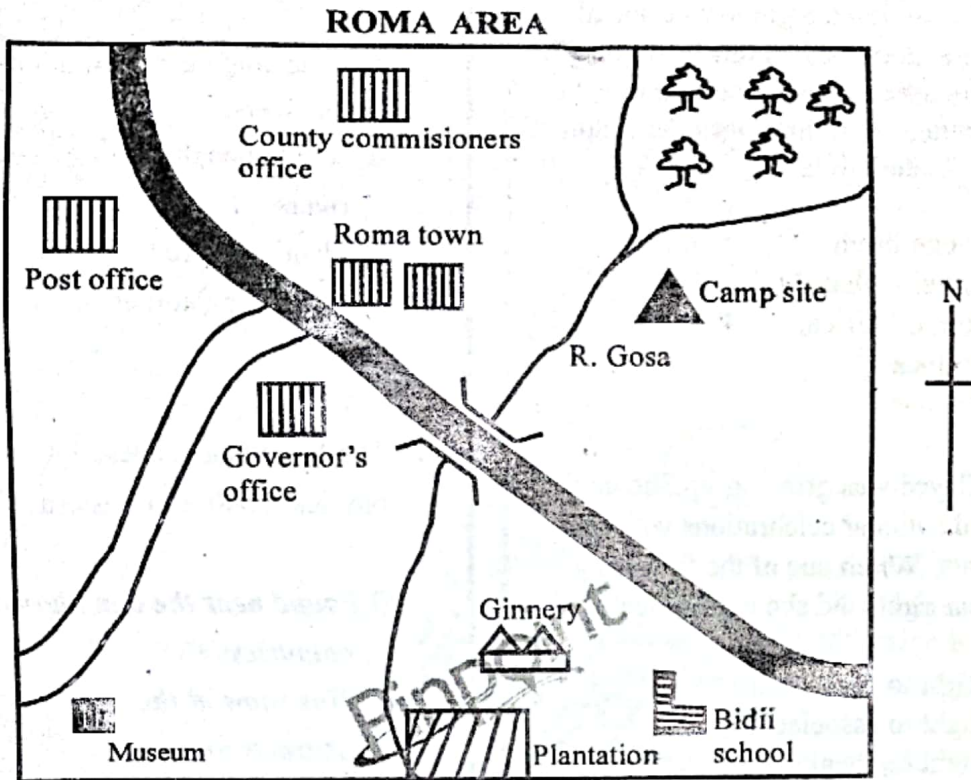
19. Which of the following represent 4 long sounds.

- A. Taa - aa - aa - aa
- B. Taaaaaaa
- C. Ta - te Ta - te
- D. Taa Taa Taa taa

20. Which of the notes symbols below is correctly matched with its corresponding rest.



**PART II: SOCIAL STUDIES AND RELIGIOUS EDUCATION**  
**SECTION A: SOCIAL STUDIES**



21. Pupils in Bidii School wanted to visit a historical build environment in the area provided above. Which one of the following directions did they follow after reaching the Roma Town
- A. North East
  - B. South west
  - C. South East
  - D. South.

22. Which one of the following is the main administration in the area provided above.
- A. Governor
  - B. County commission
  - C. Police
  - D. Ward administration

23. The main cash crop grown in the area is
- A. coffee
  - B. sugarcane
  - C. maize
  - D. cotton.

24. The pupils in grade six in Wema primary school went to study a certain climatic zone within the locality. They were able to gather the following characteristics.

- i) Some parts experience short dry season.
- ii) High rainfall over 1,100mm per year.
- iii) Moderate temperature of about 22°C.
- iv) High humidity through the year.
- v) Has two main seasons wet and dry.

The climatic zone they could have visited is

- A. Sub - Tropical climate
- B. Modified Equatorial Climate
- C. Semi arid
- D. Tropical climate.

25. Mr. Kombo an elder in one of the communities around the school was invited by Juma a grade five social teacher to discuss on the origin of some communities. Which one of the following could have been the origin of River Lake Nilotes?

- A. Congo basin
- B. Barhel - Ghazal
- C. Horn of Africa
- D. Arabica

26. As Clayed was growing up, She could attend national celebrations with her parents. Which one of the following human rights did she experience?

- A. Right to Education
- B. Right to association
- C. Right top healthcare
- D. Right to Leisure

27. Which one of the following historic built Environment in Eastern Africa is found in correctly matched with the Country where they are found.

- A. St Francisco monument - Ethiopia
- B. The peoples palace - Tanzania
- C. Namuyango Shrine - Uganda
- D. Fort Jesus Museum - Sudan

28. The lake below was formed as a result of



- A. volcanicity
- B. faulting
- C. downwaping
- D. deposition.

29. The best way to conserve rivers in Eastern Africa is by

- A. educating people on the importance of rivers
- B. setting penalties on the pollution of rivers
- C. planting more trees
- D. controlling soil erosion.

30. The following is a description of a certain physical feature in Eastern Africa.

- i) Found near the boundary of two countries
- ii) Has snow at the peak
- iii) Attracts tourist
- iv) Was formed through volcanicity

The physical feature described above is

- A. Mt. Ruwenzori
- B. Mt. Kilimanjaro
- C. Mt Elgon
- D. Mt Meru.

31. A grade five teacher at Kiko primary school invited an elder to discuss the methods of instructions used in Traditional education. Which one of the following instruction method was not discussed?


- A. Apprenticeship
- B. Imitation
- C. Use of songs
- D. Use of poems

32. Grade five pupils of Salama primary School came up with measures to help reduce road accidents. One of the ways was to observe road signs. The road signs shown below means



- A. No parking
- B. No entry
- C. Stop
- D. No stopping or waiting.

33. The diagram below shows a type of farming. It is known as



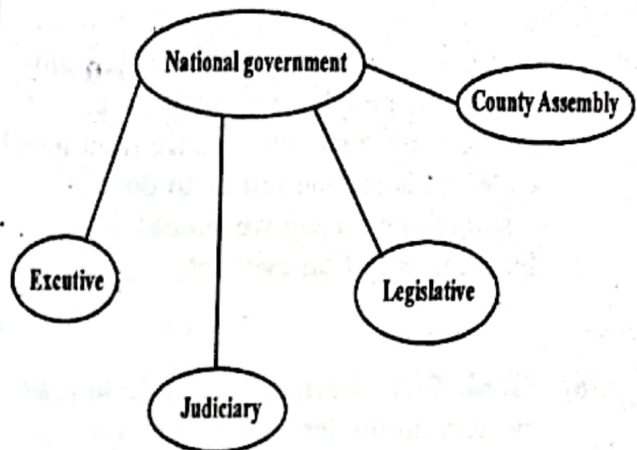
- A. horticulture
- B. subsistence farming
- C. dairy farming
- D. large scale farming.

34. Pupils of Kwanza Primary school discussed with their Social studies leader on the Modern methods of communication. The method of communication shown below is



- A. Telephone
- B. Radio
- C. Zoom
- D. Postal services

35. The diagram below shows the structure of a national government in Kenya.



Which one of the following is not correctly classified

- A. Executive
- B. County Assembly
- C. Legislative
- D. Judiciary

### PART III: RELIGIOUS EDUCATION

#### SECTION A:

#### CHRISTIAN RELIGIOUS EDUCATION

36. Grade five learners of Bidii primary school were divided into groups to read and discuss the responsibilities given to human beings by God. From the discussion they did not find out that human beings

- A. were given the responsibility of naming God's creatures.
- B. ruling over other creatures.
- C. conserving and cultivating the land
- D. eat all fruits found in the garden of eden.

37. According to 2nd Samuel 13: 4-14, we learn that Ammon loved his Half sister Tamar. Which one of the following lessons is learnt from the above story?

- A. We should be careful when left alone with the people of opposite sex.
- B. We should use our leisure time wisely.
- C. When someone tell us to do something wrong we should do it.
- D. Rape is not an evel act.

38. Grade five learners were told to make posters on the lessons learnt from Genesis chapter 3 about the human disobedience. Which one of the following could have been one of the lessons.

- A. Disobedience causes fear
- B. Good choices have consequences
- C. We should not listen to the instructions given
- D. Disobedience results into good relationship.

39. The bible is a library of books written by men and women inspired by the holy spirit. It is divided into two testaments. Which one of the following group of books consist of law books?

- A. Mathew, Mark, Luke and John
- B. Genesis, Exodus, Leviticus, Numbers
- C. Joshua, Genesis, Ruth, Exodus,
- D. Deutronomy, Joshua, Exodus, Ruth

40. Grade six learners were told to brainstorm on lessons learnt from the story of Noah and his sons. The pupils came with the following lessons Except?

- A. Show respect
- B. Use leisure time well
- C. Curse our enemies
- D. Respecting elderly is rewarded by blessings from God.

41. What lessons do christians learn from the story of a hand writing on the wall?

- A. Pride is bad
- B. Should avoid bad company
- C. Yaweh is the true God
- D. God answer ptrayers.

42. Which one of the following boxes contains gifts of the holy spirit only

- A. healing, knowledge
- B. peace, gentleness
- C. patience, prophecy
- D. love, kindness.

43. Juma was requested by his hailing father to look after the cattle after school but he refused. Juma should be taught the value of

- A. kindness
- B. humility
- C. obedience
- D. honesty.

44. A grade five teacher asked the learners to discuss the lessons learnt from the story of raising a widows son. The learners gave the following responses

Obadiah - Practice the act of thankfulness

James - Be serious

Rodha - Be Merciful

Rebecca - Treat all people equall.

Who among the following learners gave the correct lesson?

- A. Obadiah
- B. Rebecca
- C. James
- D. Rodha.

45. Grade four learners of Huduma primary school were told by their CRE subject teacher to discuss the similarities between the announcing of the birth of Jesus Christ and John the Baptist? Which one of the following is not among the answers they gave?

- A. Announced by Angel Gabriel
- B. Occured in a special way
- C. Names were given by the Angel
- D. Both occured through the Holy Spirit

46. Amos and his friends were playing near the road. It had rained heavily that afternoon, so the road was slippery. A head of them was an old man who was carrying a bag of fruits and vegetables were thrown all over the muddy ground. Two of his friends burst out laughing as they pointed at the old man. Amos walked fast to the old man and help him stand up then collected his fruits and vegetables. Which one of the following virtues did Amos show?

- A. Love
- B. Patience
- C. Integrity
- D. Kindness

47. Who among the following was not among the twelve disciples of Jesus

- A. Thaddeaus
- B. Mathias
- C. Thomas
- D. Barthlomew

48. The Grade 3 pupils of Umoja Primary School, discussed about the coming of the holyspirit. During that day, Peter preached and many people believed and were baptised. How many people believed?

- A. 120
- B. 3,000
- C. 4000
- D. 144

49. The grade six learners of a certain school brainstormed on ways of taking care of the environment. They came up with the following ways **except**

- A. cleaning rivers
- B. educating people on the importance of the environment
- C. planting trees
- D. swimming a nearby river.

50. Rehema's Family is needy. Her father wants to mary her off to a rich Old man. He wants to use her bride price to build a better house for the family. As a christian the best advice to give Rehema is

- A. accept to be married as she will also benefit
- B. refuse and report to the authority
- C. ran away from home
- D. accept and move on.

**SECTION : B**

**ISLAMIC RELIGIOUS EDUCATION**

36. Which surah below mentions earthquake?

- A. Dhuha
- B. Biyyinah
- C. Zilzalah
- D. Takaathur

37. In the battle of Badr, the muslims were while the Quarish were

- A. 313-1000
- B. 500 -1000
- C. 1000-3000
- D. 14-70.

38. One of these names is not good for a muslims to be called. Which one?

- A. Abdul-Majid
- B. Abdul Wahab
- C. Abdul-Kaaba
- D. Abdul salam

39. NIFAS means

- A. the blood of child birth.
- B. the dead body.
- C. themonthly periods
- D. a space.

40. Which prophet built an ark as comand of allah?

- A. Muhammad
- B. Ibrahim
- C. Musa
- D. Nuh

41. Among the following people, who is not allowed to fast?

- A. worshippers
- B. imams
- C. The sick
- D. girls

42. Abdun was seen performing three rakaas after Isha prayer and immediately gave salaam. Which prayer could this be?

- A. Witr
- B. Muharam
- C. Rajab
- D. Dhul-Qaadon

43. Which of the following months is not Ash-hurum

- A. Muharam
- B. Ramadhan
- C. Rajab
- D Dhul-Qaadon.

44. Khamr means

- A. intoxicant
- B. milk
- C. river
- D. haraam.

45. The word Tawakkul means

- A. fear of Allah
- B. trust in Allah
- C. believe in Allah
- D. love of Allah.

46. Which one of the following is a source of knowledge?
- A. Ancestors
  - B. Witch doctors
  - C. Angels
  - D. The revealed
47. Which pillar of Islam is mentioned 82 times alongside with swalat?
- A. Shahada
  - B. Hajj
  - C. Zakat
  - D. Saum
48. Where do we find the prophets mosque?
- A. Madinah
  - B. Taif
  - C. Makkah
  - D. Jaddah
49. The best present you can give to your parents is
- A. Wealth
  - B. Obedience
  - C. house
  - D. car
50. The prophet (S.A.W) said whoever believes in Allah and the last day let him not annoy his
- A. father
  - B. neighbour
  - C. brother
  - D. mother.

Pinpoint